

Physics

1. A particle of mass M and charge Q moving with velocity \vec{v} describes a circular path of radius R when subjected to a uniform transverse magnetic field of induction B . The work done by the field when the particle completes one full circle is :
 - (a) $\left(\frac{Mv^2}{R}\right) 2\pi R$
 - (b) zero
 - (c) $BQ 2\pi R$
 - (d) $BQv 2\pi R$
2. A particle of charge -16×10^{-18} C moving with velocity 10 ms^{-1} along the x -axis enters a region where a magnetic field of induction B is along the y -axis and an electric field of magnitude 10^4 V/m is along the negative z -axis. If the charged particle continues moving along the x -axis, the magnitude of B is :
 - (a) 10^3 Wb/m^2
 - (b) 10^5 Wb/m^2
 - (c) 10^{16} Wb/m^2
 - (d) 10^{-3} Wb/m^2
3. A thin rectangular magnet suspended freely has a period of oscillation equal to T . Now it is broken into two equal halves (each having half of the original length) and one piece is made to oscillate freely in the same field. If its period of oscillation is T' , the ratio T'/T is :
 - (a) $\frac{1}{2\sqrt{2}}$
 - (b) $\frac{1}{2}$
 - (c) 2
 - (d) $\frac{1}{4}$
4. A magnetic needle lying parallel to a magnetic field requires W unit of work to turn it through 60° . The torque needed to maintain the needle in this position will be :
 - (a) $\sqrt{3}W$
 - (b) W
 - (c) $(\sqrt{3}/2)W$
 - (d) $2W$
5. The magnetic lines of force inside a bar magnet :
 - (a) are from north-pole to south-pole of the magnet
 - (b) do not exist
 - (c) depend upon the area of cross-section of the bar magnet
 - (d) are from south-pole to north-pole of the magnet
6. Curie temperature is the temperature above which :
 - (a) a ferromagnetic material becomes paramagnetic
 - (b) a paramagnetic material becomes diamagnetic
 - (c) a ferromagnetic material becomes diamagnetic
 - (d) a paramagnetic material becomes ferromagnetic
7. A spring balance is attached to the ceiling of a lift. A man hangs his bag on the spring and the spring reads 49 N, when the lift is stationary. If the lift moves downward with an acceleration of 5 m/s^2 , the reading of the spring balance will be :
 - (a) 24 N
 - (b) 74 N
 - (c) 15 N
 - (d) 49 N
8. The length of a wire of a potentiometer is 100 cm, and the emf of its stand and cell is E volt. It is employed to measure the emf of a battery whose internal resistance is 0.5Ω . If the balance point is obtained at $l = 30$ cm from the positive end, the emf of the battery is :
 - (a) $\frac{30E}{100.5}$
 - (b) $\frac{30E}{100 - 0.5}$
 - (c) $\frac{30(E - 0.5i)}{100}$, where i is the current in the potentiometer wire
 - (d) $\frac{30E}{100}$
9. A strip of copper and another of germanium are cooled from room temperature to 80 K. The resistance of :

- (a) each of these decreases
 (b) copper strip increases and that of germanium decreases
 (c) copper strip decreases and that of germanium increases
 (d) each of the above increases
10. Consider telecommunication through optical fibres. Which of the following statements is not true ?
 (a) Optical fibres can be of graded refractive index
 (b) Optical fibres are subjected to electromagnetic interference from outside
 (c) Optical fibres have extremely low transmission loss
 (d) Optical fibres may have homogeneous core with a suitable cladding
11. The thermo-emf of a thermocouple is $25 \mu\text{V}/^\circ\text{C}$ at room temperature. A galvanometer of 40Ω resistance, capable of detecting current as low as 10^{-5} A, is connected with the thermocouple. The smallest temperature difference that can be detected by this system is :
 (a) 16°C (b) 12°C
 (c) 8°C (d) 20°C
12. The negative Zn pole of Daniell cell, sending a constant current through a circuit, decreases in mass by 0.13 g in 30 minutes. If the electrochemical equivalent of Zn and Cu are 32.5 and 31.5 respectively, the increase in the mass of the positive Cu pole in this time is :
 (a) 0.180 g (b) 0.141 g
 (c) 0.126 g (d) 0.242 g
13. Dimensions of $\frac{1}{\mu_0 \epsilon_0}$, where symbols have their usual meaning, are :
 (a) $[\text{L}^{-1}\text{T}]$ (b) $[\text{L}^2\text{T}^{-2}]$
 (c) $[\text{L}^2\text{T}^{-2}]$ (d) $[\text{LT}^{-1}]$
14. A circular disc X of radius R is made from an iron plate of thickness t, and another disc Y of radius 4R is made from an iron plate of thickness t/4. Then the relation between the moment of inertia I_X and I_Y is :
 (a) $I_Y = 32I_X$ (b) $I_Y = 16I_X$
 (c) $I_Y = I_X$ (d) $I_Y = 64I_X$
15. The time period of a satellite of earth is 5 hours. If the separation between the earth and the satellite is increased to 4 times the previous value, the new time period will become :
 (a) 10 h (b) 80 h
 (c) 40 h (d) 20 h
16. A particle performing uniform circular motion has angular momentum L. If its angular frequency is doubled and its kinetic energy halved, then the new angular momentum is :
 (a) $\frac{L}{4}$ (b) $2L$
 (c) $4L$ (d) $\frac{L}{2}$
17. Which of the following radiations has the least wavelength ?
 (a) γ -rays (b) β -rays
 (c) α -rays (d) X-rays
18. When U^{238} nucleus originally at rest, decays by emitting an alpha particle having a speed u, the recoil speed of the residual nucleus is :
 (a) $\frac{4u}{238}$ (b) $-\frac{4u}{234}$
 (c) $\frac{4u}{234}$ (d) $-\frac{4u}{238}$
19. Two spherical bodies of mass M and 5M and radii R and 2R respectively are released in free space with initial separation between their centres equal to 12R. If they attract each other due to gravitational force only, then the distance covered by the smaller body just before collision is :
 (a) 2.5R (b) 4.5R
 (c) 7.5R (d) 1.5R
20. The difference in the variation of resistance with temperature in a metal and a semiconductor arises essentially due to the difference in the :
 (a) crystal structure
 (b) variation of the number of charge carriers with temperature
 (c) type of bonding
 (d) variation of scattering mechanism with temperature
21. A car moving with a speed of 50 km/h, can be stopped by brakes after at least 6 m. If the same car is moving at a speed of 100 km/h, the minimum stopping distance is :
 (a) 12 m (b) 18 m
 (c) 24 m (d) 6 m
22. A boy playing on the roof of a 10 m high building throws a ball with a speed of 10 m/s at an angle of 30° with the horizontal. How far from the throwing point will the ball be at the height of 10 m from the ground ? [$g = 10 \text{ m/s}^2$, $\sin 30^\circ = 1/2$, $\cos 30^\circ = \sqrt{3}/2$]
 (a) 5.20 m (b) 4.33 m
 (c) 2.60 m (d) 8.66 m
23. An ammeter reads upto 1A. Its internal resistance is 0.81Ω . To increase the range to 10 A, the value of the required shunt is :

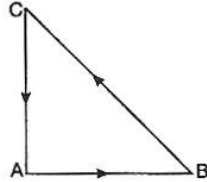
- (a) $0.03\ \Omega$ (b) $0.3\ \Omega$
 (c) $0.9\ \Omega$ (d) $0.09\ \Omega$

24. The physical quantities not having same dimensions are :

- (a) torque and work
 (b) momentum and Planck's constant
 (c) stress and Young's modulus
 (d) speed and $(\mu_0 \epsilon_0)^{-1/2}$

25. Three forces start acting simultaneously on a particle moving with

velocity \vec{v} . These forces are represented in magnitude and direction by the three sides of a triangle ABC (as shown). The particle will now move with velocity :

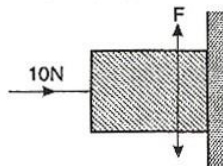


- (a) less than \vec{v}
 (b) greater than \vec{v}
 (c) $|\vec{v}|$ in the direction of largest force BC
 (d) \vec{v} , remaining unchanged

26. If the electric flux entering and leaving an enclosed surface respectively is ϕ_1 and ϕ_2 , the electric charge inside the surface will be :

- (a) $(\phi_2 - \phi_1) \epsilon_0$ (b) $(\phi_1 + \phi_2) / \epsilon_0$
 (c) $(\phi_2 - \phi_1) / \epsilon_0$ (d) $(\phi_1 + \phi_2) \epsilon_0$

27. A horizontal force of 10 N is necessary to just hold a block stationary against a wall. The coefficient of friction between the block and the wall is



0.2. The weight of the block is :

- (a) 20 N (b) 50 N
 (c) 100 N (d) 2 N

28. A marble block of mass 2 kg lying on ice when given a velocity of 6 m/s is stopped by friction in 10 s. Then the coefficient of friction is :

- (a) 0.02 (b) 0.03
 (c) 0.06 (d) 0.01

29. Consider the following two statements :

- A. Linear momentum of a system of particles is zero.
 B. Kinetic energy of a system of particles is zero.

Then :

- (a) A does not imply B and B does not imply A
 (b) A implies B but B does not imply A
 (c) A does not imply B but B implies A
 (d) A implies B and B implies A

30. Two coils are placed close to each other. The mutual inductance of the pair of coils depends upon :

- (a) the rates at which currents are changing in the two coils
 (b) relative position and orientation of the two coils
 (c) the materials of the wires of the coils
 (d) the currents in the two coils

31. A block of mass M is pulled along a horizontal frictionless surface by a rope of mass m . If a force P is applied at the free end of the rope, the force exerted by the rope on the block is :

- (a) $\frac{Pm}{M+m}$ (b) $\frac{Pm}{M-m}$
 (c) P (d) $\frac{PM}{M+m}$

32. A light spring balance hangs from the hook of the other light spring balance and a block of mass M kg hangs from the former one. Then the true statement about the scale reading is :

- (a) both the scales read M kg each
 (b) the scale of the lower one reads M kg and of the upper one zero
 (c) the reading of the two scales can be anything but the sum of the readings will be M kg
 (d) both the scales read $M/2$ kg

33. A wire suspended vertically from one of its ends is stretched by attaching a weight of 200 N to the lower end. The weight stretches the wire by 1 mm. Then the elastic energy stored in the wire is :

- (a) 0.2 J (b) 10 J
 (c) 20 J (d) 0.1 J

34. The escape velocity for a body projected vertically upwards from the surface of earth is 11 km/s. If the body is projected at an angle of 45° with the vertical, the escape velocity will be :

- (a) $11\sqrt{2}$ km/s (b) 22 km/s
 (c) 11 km/s (d) $11/\sqrt{2}$ m/s

35. A mass M is suspended from a spring of negligible mass. The spring is pulled a little and then released so that the mass executes SHM of time period T . If the mass is increased by m , the time period becomes $5T/3$, then the ratio of $\frac{m}{M}$ is :

- (a) $\frac{3}{5}$ (b) $\frac{25}{9}$
 (c) $\frac{16}{9}$ (d) $\frac{5}{3}$

36. "Heat cannot be itself flow from a body at lower temperature to a body at higher temperature" is a statement or consequence of :

- (a) second law of thermodynamics
- (b) conservation of momentum
- (c) conservation of mass
- (d) first law of thermodynamics

37. Two particles A and B of equal masses are suspended from two massless springs of spring constants k_1 and k_2 , respectively. If the maximum velocities, during oscillations are equal, the ratio of amplitudes of A and B is :

- (a) $\sqrt{k_1/k_2}$
- (b) k_1/k_2
- (c) $\sqrt{k_2/k_1}$
- (d) k_2/k_1

38. The length of a simple pendulum executing simple harmonic motion is increased by 21%. The percentage increase in the time period of the pendulum of increased length is :

- (a) 11%
- (b) 21%
- (c) 42%
- (d) 10.5%

39. The displacement y of a wave travelling in the x -direction is given by

$$y = 10^{-4} \sin \left(600t - 2x + \frac{\pi}{3} \right) \text{ metre,}$$

where, x is expressed in metres and t in seconds. The speed of the wave-motion, in ms^{-1} is :

- (a) 300
- (b) 600
- (c) 1200
- (d) 200

40. When the current changes from $+2\text{A}$ to -2A in 0.05 s , an emf of 8 V is induced in a coil. The coefficient of self-induction of the coil is :

- (a) 0.2 H
- (b) 0.4 H
- (c) 0.8 H
- (d) 0.1 H

41. In an oscillating LC circuit the maximum charge on the capacitor is Q . The charge on the capacitor when the energy is stored equally between the electric and magnetic fields is :

- (a) $Q/2$
- (b) $Q/\sqrt{3}$
- (c) $Q/\sqrt{2}$
- (d) Q

42. The core of any transformer is laminated so as to :

- (a) reduce the energy loss due to eddy currents
- (b) make it light weight
- (c) make it robust and strong
- (d) increase the secondary voltage

43. Let \vec{F} be the force acting on a particle having position vector \vec{r} and $\vec{\tau}$ be the torque of this force about the origin. Then :

- (a) $\vec{r} \cdot \vec{\tau} = 0$ and $\vec{F} \cdot \vec{\tau} \neq 0$
- (b) $\vec{r} \cdot \vec{\tau} \neq 0$ and $\vec{F} \cdot \vec{\tau} = 0$
- (c) $\vec{r} \cdot \vec{\tau} \neq 0$ and $\vec{F} \cdot \vec{\tau} \neq 0$
- (d) $\vec{r} \cdot \vec{\tau} = 0$ and $\vec{F} \cdot \vec{\tau} = 0$

44. A radioactive sample at any instant has its disintegration rate 5000 disintegrations per minute. After 5 minutes, the rate is 1250 disintegrations per minute. Then, the decay constant (per minute) is :

- (a) $0.4 \ln 2$
- (b) $0.2 \ln 2$
- (c) $0.1 \ln 2$
- (d) $0.8 \ln 2$

45. A nucleus with $Z = 92$ emits the following in a sequence : $\alpha, \alpha, \beta^-, \beta^-, \alpha, \alpha, \alpha, \alpha; \beta^-, \beta^-, \alpha, \beta^+, \beta^+, \alpha$. The Z of the resulting nucleus is :

- (a) 76
- (b) 78
- (c) 82
- (d) 74

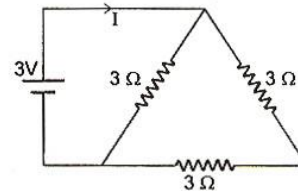
46. Two identical, photocathodes receive light of frequencies f_1 and f_2 . If the velocities of the photoelectrons (of mass m) coming out are respectively v_1 and v_2 , then :

- (a) $v_1^2 - v_2^2 = \frac{2h}{m} (f_1 - f_2)$
- (b) $v_1 + v_2 = \left[\frac{2h}{m} (f_1 + f_2) \right]^{1/2}$
- (c) $v_1^2 + v_2^2 = \frac{2h}{m} (f_1 + f_2)$
- (d) $v_1 - v_2 = \left[\frac{2h}{m} (f_1 - f_2) \right]^{1/2}$

47. Which of the following cannot be emitted by radioactive substances during their decay ?

- (a) Protons
- (b) Neutrinos
- (c) Helium nuclei
- (d) Electrons

48. A 3V battery with negligible internal resistance is connected in a circuit as shown in the figure. The current I , in the circuit will be :

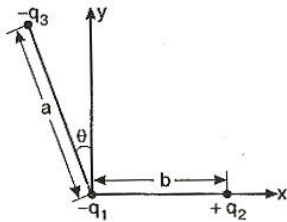


- (a) 1 A
- (b) 1.5 A
- (c) 2 A
- (d) $\frac{1}{3}\text{ A}$

49. A sheet of aluminium foil of negligible thickness is introduced between the plates of a capacitor. The capacitance of the capacitor :

- (a) decreases (b) remains unchanged
(c) becomes infinite (d) increases
50. The displacement of a particle varies according to the relation $x = 4(\cos \pi t + \sin \pi t)$. The amplitude of the particle is :
(a) - 4 (b) 4
(c) $4\sqrt{2}$ (d) 8
51. A thin spherical conducting shell of radius R has a charge q . Another charge Q is placed at the centre of the shell. The electrostatic potential at a point P at a distance $R/2$ from the centre of the shell is :
(a) $\frac{2Q}{4\pi\epsilon_0 R}$ (b) $\frac{2Q}{4\pi\epsilon_0 R} - \frac{2q}{4\pi\epsilon_0 R}$
(c) $\frac{2Q}{4\pi\epsilon_0 R} + \frac{q}{4\pi\epsilon_0 R}$ (d) $\frac{(q+Q)}{4\pi\epsilon_0 R}$
52. The work done in placing a charge of 8×10^{-18} C on a condenser of capacity $100 \mu\text{F}$ is :
(a) 16×10^{-32} J (b) 3.1×10^{-26} J
(c) 4×10^{-10} J (d) 32×10^{-32} J
53. The co-ordinates of a moving particle at any time t are given by $x = \alpha t^3$ and $y = \beta t^3$. The speed of the particle at time t is given by :
(a) $3t \sqrt{\alpha^2 + \beta^2}$ (b) $3t^2 \sqrt{\alpha^2 + \beta^2}$
(c) $t^2 \sqrt{\alpha^2 + \beta^2}$ (d) $\sqrt{\alpha^2 + \beta^2}$
54. During an adiabatic process, the pressure of a gas is found to be proportional to the cube of its absolute temperature. The ratio C_p/C_v for the gas is :
(a) 4/3 (b) 2
(c) 5/3 (d) 3/2
55. Which of the following parameters does not characterise the thermodynamic state of matter ?
(a) Temperature (b) Pressure
(c) Work (d) Volume
56. A Carnot engine takes 3×10^6 cal of heat from a reservoir at 627°C and gives it to a sink at 27°C . The work done by the engine is :
(a) 4.2×10^6 J (b) 8.4×10^6 J
(c) 16.8×10^6 J (d) zero
57. A spring of spring constant 5×10^3 N/m is stretched initially by 5 cm from the unstretched position. Then the work required to stretch it further by another 5 cm is :
(a) 12.50 N-m (b) 18.75 N-m
(c) 25.00 N-m (d) 6.25 N-m
58. A metal wire of linear mass density of 9.8 g/m is stretched with a tension of 10 kg-wt between two rigid supports 1 m apart. The wire passes at its middle point between the poles of a permanent magnet and it vibrates in resonance when carrying an alternating current of frequency n . The frequency n of the alternating source is :
(a) 50 Hz (b) 100 Hz
(c) 200 Hz (d) 25 Hz
59. A tuning fork of known frequency 256 Hz makes 5 beats/s with the vibrating string of a piano. The beat frequency decreases to 2 beats/s when the tension in the piano string is slightly increased. The frequency of the piano string before increasing the tension was :
(a) $(256 + 2)$ Hz (b) $(256 - 2)$ Hz
(c) $(256 - 5)$ Hz (d) $(256 + 5)$ Hz
60. A body executes simple harmonic motion. The potential energy (PE), the kinetic energy (KE) and total energy (TE) are measured as function of displacement x . Which of the following statement is true ?
(a) KE is maximum when $x = 0$
(b) TE is zero when $x = 0$
(c) KE is maximum when x is maximum
(d) PE is maximum when $x = 0$
61. In the nuclear fusion reaction,
 ${}^2_1\text{H} + {}^3_1\text{H} \rightarrow {}^4_2\text{He} + n$
given that the repulsive potential energy between the two nuclei is 7.7×10^{-14} J, the temperature at which the gases must be heated to initiate the reaction is nearly [Boltzmann's constant $k = 1.38 \times 10^{-23}$ J/K] :
(a) 10^7 K (b) 10^5 K
(c) 10^3 K (d) 10^9 K
62. Which of the following atoms has the lowest ionization potential ?
(a) ${}^{14}_7\text{N}$ (b) ${}^{133}_{55}\text{Cs}$
(c) ${}^{40}_{18}\text{Ar}$ (d) ${}^{16}_8\text{O}$
63. The wavelengths involved in the spectrum of deuterium (${}^2_1\text{D}$) are slightly different from that of hydrogen spectrum, because :
(a) sizes of the two nuclei are different
(b) nuclear forces are different in the two cases
(c) masses of the two nuclei are different
(d) attraction between the electron and the nucleus is different in the two cases
64. In the middle of the depletion layer of reverse biased p - n junction, the :
(a) electric field is zero
(b) potential is maximum
(c) electric field is maximum
(d) potential is zero

65. If the binding energy of the electron in a hydrogen atom is 13.6 eV, the energy required to remove the electron from the first excited state of Li^{2+} is :
 (a) 30.6 eV (b) 13.6 eV
 (c) 3.4 eV (d) 122.4 eV
66. A body is moved along a straight line by a machine delivering a constant power. The distance moved by the body in time t is proportional to :
 (a) $t^{3/4}$ (b) $t^{3/2}$
 (c) $t^{1/4}$ (d) $t^{1/2}$
67. A rocket with a lift-off mass 3.5×10^4 kg is blasted upwards with an initial acceleration of 10 m/s^2 . Then the initial thrust of the blast is :
 (a) $3.5 \times 10^5 \text{ N}$ (b) $7.0 \times 10^5 \text{ N}$
 (c) $14.0 \times 10^5 \text{ N}$ (d) $1.75 \times 10^5 \text{ N}$
68. To demonstrate the phenomenon of interference we require two sources which emit radiations of :
 (a) nearly the same frequency
 (b) the same frequency
 (c) different wavelength
 (d) the same frequency and having a definite phase relationship
69. Three charges $-q_1$, $+q_2$ and $-q_3$ are placed as shown in the figure. The x -component of the force on $-q_1$ is proportional to :



- (a) $\frac{q_2}{b^2} - \frac{q_3}{a^2} \cos \theta$ (b) $\frac{q_2}{b^2} + \frac{q_3}{a^2} \sin \theta$
 (c) $\frac{q_2}{b^2} + \frac{q_3}{a^2} \cos \theta$ (d) $\frac{q_2}{b^2} - \frac{q_3}{a^2} \sin \theta$

70. A 220 V, 1000 W bulb is connected across a 110 V mains supply. The power consumed will be :
 (a) 750 W (b) 500 W
 (c) 250 W (d) 1000 W
71. The image formed by an objective of a compound microscope is :
 (a) virtual and diminished
 (b) real and diminished
 (c) real and enlarged
 (d) virtual and enlarged
72. The earth radiates in the infra-red region of the spectrum. The spectrum is correctly given by :
 (a) Rayleigh Jeans law
 (b) Planck's law of radiation
 (c) Stefan's law of radiation
 (d) Wien's law
73. To get three images of a single object, one should have two plane mirrors at an angle of :
 (a) 60° (b) 90°
 (c) 120° (d) 30°
74. According to Newton's law of cooling, the rate of cooling of a body is proportional to $(\Delta \theta)^n$, where $\Delta \theta$ is the difference of the temperature of the body and the surroundings, and n is equal to :
 (a) 2 (b) 3
 (c) 4 (d) 1
75. The length of a given cylindrical wire is increased by 100%. Due to the consequent decrease in diameter the change in the resistance of the wire will be :
 (a) 200% (b) 100%
 (c) 50% (d) 300%

Chemistry

76. In Bohr series of lines of hydrogen spectrum, the third line from the red end corresponds to which one of the following inner-orbit jumps of the electron for Bohr orbits in an atom of hydrogen ?
 (a) $3 \rightarrow 2$ (b) $5 \rightarrow 2$
 (c) $4 \rightarrow 1$ (d) $2 \rightarrow 5$
77. The de-Broglie wavelength of a tennis ball of mass 60g moving with a velocity of 10 m/s is approximately :
 (Planck's constant, $h = 6.63 \times 10^{-34} \text{ Js}$)
 (a) 10^{-33} m (b) 10^{-31} m
 (c) 10^{-16} m (d) 10^{-25} m
78. The orbital angular momentum for an electron revolving in an orbit is given by $\sqrt{l(l+1)} \frac{h}{2\pi}$. This momentum for an s -electron will be given by :
 (a) $+\frac{1}{2} \cdot \frac{h}{2\pi}$ (b) zero
 (c) $\frac{h}{2\pi}$ (d) $\sqrt{2} \cdot \frac{h}{2\pi}$
79. How many unit cells are present in a cube shaped ideal crystal of NaCl of mass 1.00 g ? [Atomic masses : Na = 23, Cl = 35.5]
 (a) 2.57×10^{21} (b) 5.14×10^{21}
 (c) 1.28×10^{21} (d) 1.71×10^{21}

80. Glass is a :
- micro-crystalline solid
 - super-cooled liquid
 - gel
 - polymeric mixture
81. Which one of the following statements is correct ?
- Manganese salts give a violet borax- bead test in the reducing flame
 - From a mixed precipitate of AgCl and AgI, ammonia solution dissolves only AgCl
 - Ferric ions give a deep green precipitate on adding potassium ferrocyanide solution
 - On boiling a solution having K^+ , Ca^{2+} and HCO_3^- ions we get a precipitate of $K_2Ca(CO_3)_2$
82. According to the periodic law of elements, the variation in properties of elements is related to their :
- atomic masses
 - nuclear masses
 - atomic numbers
 - nuclear neutron-proton number ratios
83. Graphite is a soft solid lubricant extremely difficult to melt. The reason for this anomalous behaviour is that graphite :
- is a non-crystalline substance
 - is an allotropic form of diamond
 - has molecules of variable molecular masses like polymers
 - has carbon atoms arranged in large plates of rings of strongly bound carbon atoms with weak interplate bonds
84. The IUPAC name of $CH_3COCH(CH_3)_2$ is :
- isopropylmethyl ketone
 - 2-methyl-3-butanone
 - 4-methylisopropyl ketone
 - 3-methyl-2-butanone
85. When $CH_2=CH-COOH$ is reduced with $LiAlH_4$, the compound obtained will be :
- CH_3-CH_2-COOH
 - $CH_2=CH-CH_2OH$
 - $CH_3-CH_2-CH_2OH$
 - CH_3-CH_2-CHO
86. According to the kinetic theory of gases, in an ideal gas, between two successive collisions a gas molecule travels :
- in a circular path
 - in a wavy path
 - in a straight line path
 - with an accelerated velocity
87. Which of the following group of transition metals is called coinage metals ?

- Cu, Ag, Au
- Ru, Rh, Pd
- Fe, Co, Ni
- Os, Ir, Pt

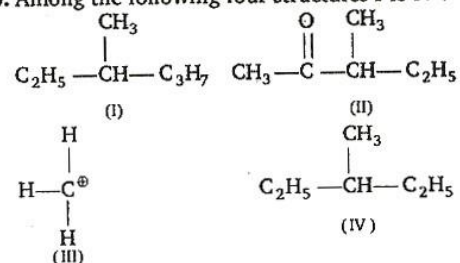
88. The general formula $C_nH_{2n}O_2$ could be for open chain :

- diketones
- carboxylic acids
- diols
- dialdehydes

89. An ether is more volatile than an alcohol having the same molecular formula. This is due to :

- dipolar character of ethers
- alcohols having resonance structures
- inter-molecular hydrogen bonding in ethers
- inter-molecular hydrogen bonding in alcohols

90. Among the following four structures I to IV :



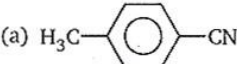
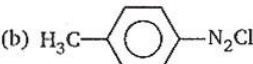
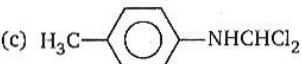
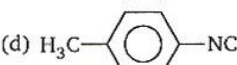
it is true that :

- all four are chiral compounds
 - only I and II are chiral compounds
 - only III is a chiral compound
 - only II and IV are chiral compounds
91. Which one of the following processes will produce hard water ?
- Saturation of water with $CaCO_3$
 - Saturation of water with $MgCO_3$
 - Saturation of water with $CaSO_4$
 - Addition of Na_2SO_4 to water
92. Which one of the following compounds has the smallest bond angle in its molecule ?
- SO_2
 - OH_2
 - SH_2
 - NH_3
93. Which one of the following pairs of molecules will have permanent dipole moments for both members ?
- SiF_4 and NO_2
 - NO_2 and CO_2
 - NO_2 and O_3
 - SiF_4 and CO_2
94. Which one of the following groupings represents a collection of isoelectronic species ? (At. numbers : Cs-55, Br-35)
- Na^+ , Ca^{2+} , Mg^{2+}
 - N^{3-} , F^- , Na^+
 - Be , Al^{3+} , Cl^-
 - Ca^{2+} , Cs^+ , Br

95. In the anion HCOO^- the two carbon-oxygen bonds are found to be of equal length. What is the reason for it ?
- Electronic orbits of carbon atom are hybridised
 - The $\text{C}=\text{O}$ bond is weaker than the $\text{C}-\text{O}$ bond
 - The anion HCOO^- has two resonating structures
 - The anion is obtained by removal of a proton from the acid molecule
96. The pair of species having identical shapes for molecules of both species is :
- CF_4 , SF_4
 - XeF_2 , CO_2
 - BF_3 , PCl_3
 - PF_5 , IF_5
97. The atomic numbers of vanadium (V), chromium (Cr), manganese (Mn) and iron (Fe) are respectively 23, 24, 25 and 26. Which one of these may be expected to have the highest second ionization enthalpy ?
- V
 - Cr
 - Mn
 - Fe
98. Consider the reaction equilibrium :
- $$2\text{SO}_2(\text{g}) + \text{O}_2(\text{g}) \rightleftharpoons 2\text{SO}_3(\text{g}); \quad \Delta H^\circ = -198 \text{ kJ}$$
- On the basis of Le-Chatelier's principle, the condition favourable for the forward reaction is :
- lowering of temperature as well as pressure
 - increasing temperature as well as pressure
 - lowering the temperature and increasing the pressure
 - any value of temperature and pressure
99. What volume of hydrogen gas, at 273K and 1 atm pressure will be consumed in obtaining 21.6g of elemental boron (atomic mass = 10.8) from the reduction of boron trichloride by hydrogen ?
- 89.6 L
 - 67.2 L
 - 44.8 L
 - 22.4 L
100. For the reaction equilibrium,
- $$\text{N}_2\text{O}_4(\text{g}) \rightleftharpoons 2\text{NO}(\text{g})$$
- the concentrations of N_2O_4 and NO at equilibrium are 4.8×10^{-2} and $1.2 \times 10^{-2} \text{ mol L}^{-1}$ respectively. The value of K_c for the reaction is :
- $3.3 \times 10^2 \text{ mol L}^{-1}$
 - $3 \times 10^{-1} \text{ mol L}^{-1}$
 - $3 \times 10^{-3} \text{ mol L}^{-1}$
 - $3 \times 10^3 \text{ mol L}^{-1}$
101. The solubility in water of a sparingly soluble salt AB_2 is $1.0 \times 10^{-5} \text{ mol L}^{-1}$. Its solubility product number will be :
- 4×10^{-15}
 - 4×10^{-10}
 - 1×10^{-15}
 - 1×10^{-10}
102. When during electrolysis of a solution of AgNO_3 , 9650 coulombs of charge pass through the electroplating bath, the mass of silver deposited on the cathode will be :
- 1.08 g
 - 10.8 g
 - 21.6 g
 - 108 g
103. For the redox reaction
- $$\text{Zn}(\text{s}) + \text{Cu}^{2+} (0.1 \text{ M}) \rightarrow \text{Zn}^{2+} (1\text{M}) + \text{Cu}(\text{s})$$
- taking place in a cell, E_{cell}° is 1.10 volt. E_{cell} for the cell will be : $\left(2.303 \frac{RT}{F} = 0.0591 \right)$
- 2.14 V
 - 1.80 V
 - 1.07 V
 - 0.82 V
104. In a 0.2 molal aqueous solution of a weak acid HX , the degree of ionisation is 0.3. Taking K_f for water as 1.85, the freezing point of the solution will be nearest to :
- -0.480°C
 - -0.360°C
 - -0.260°C
 - $+0.480^\circ\text{C}$
105. The rate law for a reaction between the substances A and B is given by rate $= k[A]^n[B]^m$. On doubling the concentration of A and halving the concentration of B , the ratio of the new rate to the earlier rate of the reaction will be as :
- $\frac{1}{2^{m+n}}$
 - $(m+n)$
 - $(n-m)$
 - $2^{(n-m)}$
106. 25mL of a solution of barium hydroxide on titration with 0.1 molar solution of hydrochloric acid gave a titre value of 35 mL. The molarity of barium hydroxide solution was :
- 0.07
 - 0.14
 - 0.28
 - 0.35
107. The correct relationship between free energy change in a reaction and the corresponding equilibrium constant K_c is :
- $\Delta G = RT \ln K_c$
 - $-\Delta G = RT \ln K_c$
 - $\Delta G^\circ = RT \ln K_c$
 - $-\Delta G^\circ = RT \ln K_c$
108. If at 298K the bond energies of $\text{C}-\text{H}$, $\text{C}-\text{C}$, $\text{C}=\text{C}$ and $\text{H}-\text{H}$ bonds are respectively 414, 347, 615 and 435 kJ mol^{-1} , the value of enthalpy change for the reaction
- $$\text{H}_2\text{C}=\text{CH}_2(\text{g}) + \text{H}_2(\text{g}) \longrightarrow \text{H}_3\text{C}-\text{CH}_3(\text{g})$$
- at 298K will be :
- + 250 k J
 - 250 k J
 - + 125 k J
 - 125 k J

109. The enthalpy change for a reaction does not depend upon the :
- physical state of reactants and products
 - use of different reactants for the same product
 - nature of intermediate reaction steps
 - difference in initial or final temperatures of involved substances
110. A pressure cooker reduces cooking time for food because :
- heat is more evenly distributed in the cooking space
 - boiling point of water involved in cooking is increased
 - the higher pressure inside the cooker crushes the food material
 - cooking involves chemical changes helped by a rise in temperature
111. If liquids *A* and *B* form an ideal solution, the :
- enthalpy of mixing is zero
 - entropy of mixing is zero
 - free energy of mixing is zero
 - free energy as well as the entropy of mixing are each zero
112. For the reaction system :
- $$2\text{NO}(g) + \text{O}_2(g) \longrightarrow 2\text{NO}_2(g)$$
- volume is suddenly reduced to half its value by increasing the pressure on it. If the reaction is of first order with respect to O_2 and second order with respect to NO ; the rate of reaction will :
- diminish to one-fourth of its initial value
 - diminish to one-eighth of its initial value
 - increase to eight times of its initial value
 - increase to four times of its initial value
113. For a cell reaction involving a two-electron change, the standard emf of the cell is found to be 0.295 V at 25°C. The equilibrium constant of the reaction at 25°C will be :
- 1×10^{-10}
 - 29.5×10^{-2}
 - 10
 - 1×10^{10}
114. In an irreversible process taking place at constant *T* and *P* and in which only pressure-volume work is being done, the change in Gibbs free energy (*dG*) and change in entropy (*dS*), satisfy the criteria :
- $(dS)_{V,E} < 0, (dG)_{T,P} < 0$
 - $(dS)_{V,E} > 0, (dG)_{T,P} < 0$
 - $(dS)_{V,E} = 0, (dG)_{T,P} = 0$
 - $(dS)_{V,E} = 0, (dG)_{T,P} > 0$
115. Which one of the following characteristics is not correct for physical adsorption ?
- Adsorption on solids is reversible
 - Adsorption increases with increase in temperature
 - Adsorption is spontaneous
 - Both enthalpy and entropy of adsorption are negative
116. In the respect of the equation $k = Ae^{-E_a/RT}$ in chemical kinetics, which one of the following statements is correct ?
- k* is equilibrium constant
 - A* is adsorption factor
 - E_a is energy of activation
 - R* is Rydberg constant
117. Standard reduction electrode potentials of three metals *A*, *B* and *C* are + 0.5V, - 3.0V and -1.2V respectively. The reducing power of these metals are :
- $B > C > A$
 - $A > B > C$
 - $C > B > A$
 - $A > C > B$
118. Which one of the following substances has the highest proton affinity ?
- H_2O
 - H_2S
 - NH_3
 - PH_3
119. Which one of the following is an amphoteric oxide ?
- ZnO
 - Na_2O
 - SO_2
 - B_2O_3
120. A red solid is insoluble in water. However it becomes soluble if some KI is added to water. Heating the red solid in a test tube results in liberation of some violet coloured fumes and droplets of a metal appear on the cooler parts of the test tube. The red solid is :
- $(\text{NH}_4)_2\text{Cr}_2\text{O}_7$
 - HgI_2
 - HgO
 - Pb_3O_4
121. Concentrated hydrochloric acid when kept in open air sometimes produces a cloud of white fumes. The explanation for it is that :
- concentrated hydrochloric acid emits strongly smelling HCl gas all the time
 - oxygen in air reacts with the emitted HCl gas to form a cloud of chlorine gas
 - strong affinity of HCl gas for moisture in air results in forming of droplets of liquid solution which appears like a cloudy smoke
 - due to strong affinity for water, concentrated hydrochloric acid pulls moisture of air towards itself. This moisture forms droplets of water and hence the cloud
122. The substance used in Holmes signals of the ship is a mixture of :
- $\text{CaC}_2 + \text{Ca}_3\text{P}_2$
 - $\text{Ca}_3(\text{PO}_4)_2 + \text{Pb}_3\text{O}_4$
 - $\text{H}_3\text{PO}_4 + \text{CaCl}_2$
 - $\text{NH}_3 + \text{HOCl}$

123. The number of d -electrons retained in Fe^{2+} (At. no. Fe = 26) ions is :
 (a) 3 (b) 4
 (c) 5 (d) 6
124. What would happen when a solution of potassium chromate is treated with an excess of dilute nitric acid ?
 (a) Cr^{3+} and $\text{Cr}_2\text{O}_7^{2-}$ are formed
 (b) $\text{Cr}_2\text{O}_7^{2-}$ and H_2O are formed
 (c) CrO_4^{2-} is reduced to + 3 state of Cr
 (d) None of the above
125. In the co-ordination compound, $\text{K}_4[\text{Ni}(\text{CN})_4]$, the oxidation state of nickel is :
 (a) - 1 (b) 0
 (c) + 1 (d) + 2
126. Ammonia forms the complex ion $[\text{Cu}(\text{NH}_3)_4]^{2+}$ with copper ions in the alkaline solutions but not in acidic solutions. What is the reason for it ?
 (a) In acidic solutions hydration protects copper ions
 (b) In acidic solutions protons co-ordinate with ammonia molecules forming NH_4^+ ions and NH_3 molecules are not available
 (c) In alkaline solutions insoluble $\text{Cu}(\text{OH})_2$ is precipitated which is soluble in excess of any alkali
 (d) Copper hydroxide is an amphoteric substance
127. One mole of the complex compound $\text{Co}(\text{NH}_3)_5\text{Cl}_3$, gives 3 moles of ions on dissolution in water. One mole of the same complex reacts with two moles of AgNO_3 solution to yield two moles of $\text{AgCl}(s)$. The structure of the complex is :
 (a) $[\text{Co}(\text{NH}_3)_5\text{Cl}]\text{Cl}_2$
 (b) $[\text{Co}(\text{NH}_3)_3\text{Cl}_2] \cdot 2\text{NH}_3$
 (c) $[\text{Co}(\text{NH}_3)_4\text{Cl}_2]\text{Cl} \cdot \text{NH}_3$
 (d) $[\text{Co}(\text{NH}_3)_4\text{Cl}]\text{Cl}_2 \cdot \text{NH}_3$
128. The radius of La^{3+} (Atomic number of La = 57) is 1.06 Å. Which one of the following given values will be closest to the radius of Lu^{3+} (Atomic number of Lu = 71)?
 (a) 1.60 Å (b) 1.40 Å
 (c) 1.06 Å (d) 0.85 Å
129. The radionuclide ${}^{234}_{90}\text{Th}$ undergoes two successive β -decays followed by one α -decay. The atomic number and the mass number respectively of the resulting radionuclide are :
 (a) 92 and 234 (b) 94 and 230
 (c) 90 and 230 (d) 92 and 230
130. The half-life of a radioactive isotope is 3 h. If the initial mass of the isotope were 256 g, the mass of it remaining undecayed after 18 h would be :
 (a) 4.0 g (b) 8.0 g
 (c) 12.0 g (d) 16.0 g
131. Several blocks of magnesium are fixed to the bottom of a ship to :
 (a) keep away the sharks
 (b) make the ship lighter
 (c) prevent action of water and salt
 (d) prevent puncturing by under-sea rocks
132. In curing cement plasters water is sprinkled from time to time. This helps in :
 (a) keeping it cool
 (b) developing interlocking needle-like crystals of hydrated silicates
 (c) hydrating sand and gravel mixed with cement
 (d) converting sand into silicic acid
133. Which one of the following statements is not true ?
 (a) The conjugate base of H_2PO_4^- is HPO_4^{2-}
 (b) $\text{pH} + \text{pOH} = 14$ for all aqueous solutions
 (c) The pH of 1×10^{-8} M HCl is 8
 (d) 96,500 coulombs of electricity when passed through a CuSO_4 solution deposit 1g equivalent of copper at the cathode
134. The correct order of increasing basic nature for the bases NH_3 , CH_3NH_2 and $(\text{CH}_3)_2\text{NH}$ is :
 (a) $\text{CH}_3\text{NH}_2 < \text{NH}_3 < (\text{CH}_3)_2\text{NH}$
 (b) $(\text{CH}_3)_2\text{NH} < \text{NH}_3 < \text{CH}_3\text{NH}_2$
 (c) $\text{NH}_3 < \text{CH}_3\text{NH}_2 < (\text{CH}_3)_2\text{NH}$
 (d) $\text{CH}_3\text{NH}_2 < (\text{CH}_3)_2\text{NH} < \text{NH}_3$
135. Butene-1 may be converted to butane by reaction with :
 (a) Zn-HCl (b) Sn-HCl
 (c) Zn-Hg (d) Pd/ H_2
136. The solubilities of carbonates decrease down the magnesium group due to a decrease in :
 (a) lattice energies of solids
 (b) hydration energies of cations
 (c) inter-ionic attraction
 (d) entropy of solution formation
137. During dehydration of alcohols to alkenes by heating with concentrated H_2SO_4 the initiation step is :
 (a) protonation of alcohol molecule
 (b) formation of carbocation
 (c) elimination of water
 (d) formation of an ester

138. Which one of the following nitrates will leave behind a metal on strong heating ?
 (a) Ferric nitrate (b) Copper nitrate
 (c) Manganese nitrate (d) Silver nitrate
139. When rain is accompanied by a thunderstorm, the collected rain water will have a pH value :
 (a) slightly lower than that of rain water without thunderstorm
 (b) slightly higher than that when the thunderstorm is not there
 (c) uninfluenced by occurrence of thunderstorm
 (d) which depends on the amount of dust in air
140. Complete hydrolysis of cellulose gives :
 (a) D-fructose (b) D-ribose
 (c) D-glucose (d) L-glucose
141. For making good quality mirrors, plates of float glass are used. These are obtained by floating molten glass over a liquid metal which does not solidify before glass. The metal used can be :
 (a) mercury (b) tin
 (c) sodium (d) magnesium
142. The substance not likely to contain CaCO_3 is :
 (a) a marble statue (b) calcined gypsum
 (c) sea shells (d) dolomite
143. The reason for double helical structure of DNA is operation of :
 (a) van der Waals' forces
 (b) dipole-dipole interaction
 (c) hydrogen bonding
 (d) electrostatic attractions
144. Bottles containing $\text{C}_6\text{H}_5\text{I}$ and $\text{C}_6\text{H}_5\text{CH}_2\text{I}$ lost their original labels. They were labelled A and B for testing. A and B were separately taken in a test tube and boiled with NaOH solution. The end solution in each tube was made acidic with dilute HNO_3 and then some AgNO_3 solution was added. Substance B gave a yellow precipitate. Which one of the following statements is true for this experiment ?
 (a) A was $\text{C}_6\text{H}_5\text{I}$
 (b) A was $\text{C}_6\text{H}_5\text{CH}_2\text{I}$
 (c) B was $\text{C}_6\text{H}_5\text{I}$
 (d) Addition of HNO_3 was unnecessary
145. Ethyl isocyanide on hydrolysis in acidic medium generates :
 (a) ethylamine salt and methanoic acid
 (b) propanoic acid and ammonium salt
 (c) ethanoic acid and ammonium salt
 (d) methylamine salt and ethanoic acid
146. The internal energy change when a system goes from state A to B is 40 kJ/mol. If the system goes from A to B by a reversible path and returns to state A by an irreversible path, what would be the net change in internal energy ?
 (a) 40 kJ (b) > 40 kJ
 (c) < 40 kJ (d) zero
147. The reaction of chloroform with alcoholic KOH and *p*-toluidine form :
 (a) 
 (b) 
 (c) 
 (d) 
148. Nylon threads are made of :
 (a) polyvinyl polymer
 (b) polyester polymer
 (c) polyamide polymer
 (d) polyethylene polymer
149. On mixing a certain alkane with chlorine and irradiating it with ultraviolet light, it forms only one monochloroalkane. This alkane could be :
 (a) propane (b) pentane
 (c) isopentane (d) neopentane
150. Which of the following could act as a propellant for rockets ?
 (a) Liquid hydrogen + liquid nitrogen
 (b) Liquid oxygen + liquid argon
 (c) Liquid hydrogen + liquid oxygen
 (d) Liquid nitrogen + liquid oxygen

14. If ${}^n C_r$ denotes the number of combinations of n things taken r at a time, then the expression ${}^n C_{r+1} + {}^n C_{r-1} + 2 \times {}^n C_r$ equals :
- (a) ${}^{n+2} C_r$ (b) ${}^{n+2} C_{r+1}$
(c) ${}^{n+1} C_r$ (d) ${}^{n+1} C_{r+1}$
15. The number of integral terms in the expansion of $(\sqrt{3} + \sqrt[8]{5})^{256}$ is :
- (a) 32 (b) 33
(c) 34 (d) 35
16. If x is positive, the first negative term in the expansion of $(1+x)^{27/5}$ is :
- (a) 7th term (b) 5th term
(c) 8th term (d) 6th term
17. The sum of the series $\frac{1}{1 \cdot 2} - \frac{1}{2 \cdot 3} + \frac{1}{3 \cdot 4} - \dots$ upto ∞ is equal to :
- (a) $2 \log_e 2$ (b) $\log_e 2 - 1$
(c) $\log_e 2$ (d) $\log_e \left(\frac{4}{e}\right)$
18. Let $f(x)$ be a polynomial function of second degree. If $f(1) = f(-1)$ and a, b, c are in AP, then $f'(a), f'(b)$ and $f'(c)$ are in :
- (a) AP
(b) GP
(c) HP
(d) arithmetico-geometric progression
19. If x_1, x_2, x_3 and y_1, y_2, y_3 are both in GP with the same common ratio, then the points $(x_1, y_1), (x_2, y_2)$ and (x_3, y_3) :
- (a) lie on a straight line
(b) lie on an ellipse
(c) lie on a circle
(d) are vertices of a triangle
20. The sum of the radii of inscribed and circumscribed circles for an n sided regular polygon of side a , is :
- (a) $a \cot \left(\frac{\pi}{n}\right)$ (b) $\frac{a}{2} \cot \left(\frac{\pi}{2n}\right)$
(c) $a \cot \left(\frac{\pi}{2n}\right)$ (d) $\frac{a}{4} \cot \left(\frac{\pi}{2n}\right)$
21. If in a triangle ABC
- $$a \cos^2 \left(\frac{C}{2}\right) + c \cos^2 \left(\frac{A}{2}\right) = \frac{3b}{2},$$
- then the sides a, b and c :
- (a) are in AP (b) are in GP
(c) are in HP (d) satisfy $a + b = c$
22. In a triangle ABC , medians AD and BE are drawn. If $AD = 4, \angle DAB = \frac{\pi}{6}$ and $\angle ABE = \frac{\pi}{3}$, then the area of the ΔABC is :
- (a) $8/3$ (b) $16/3$
(c) $32/3$ (d) $64/3$
23. The trigonometric equation $\sin^{-1} x = 2 \sin^{-1} a$, has a solution for :
- (a) $\frac{1}{2} < |a| < \frac{1}{\sqrt{2}}$ (b) all real values of a
(c) $|a| < \frac{1}{2}$ (d) $|a| \geq \frac{1}{\sqrt{2}}$
24. The upper $3/4$ th portion of a vertical pole subtends an angle $\tan^{-1} 3/5$ at a point in the horizontal plane through its foot and at a distance 40 m from the foot. A possible height of the vertical pole is :
- (a) 20 m (b) 40 m
(c) 60 m (d) 80 m
25. The real number x when added to its inverse gives the minimum value of the sum at x equals to :
- (a) 2 (b) 1
(c) -1 (d) -2
26. If $f: R \rightarrow R$ satisfies $f(x+y) = f(x) + f(y)$, for all $x, y \in R$ and $f(1) = 7$, then $\sum_{r=1}^n f(r)$ is :
- (a) $\frac{7n}{2}$ (b) $\frac{7(n+1)}{2}$
(c) $7n(n+1)$ (d) $\frac{7n(n+1)}{2}$
27. If $f(x) = x^n$, then the value of $f(1) - \frac{f'(1)}{1!} + \frac{f''(1)}{2!} - \frac{f'''(1)}{3!} + \dots + \frac{(-1)^n f^{(n)}(1)}{n!}$ is :
- (a) 2^n (b) 2^{n-1}
(c) 0 (d) 1
28. Domain of definition of the function $f(x) = \frac{3}{4-x^2} + \log_{10}(x^3 - x)$, is :
- (a) $(1, 2)$
(b) $(-1, 0) \cup (1, 2)$
(c) $(1, 2) \cup (2, \infty)$
(d) $(-1, 0) \cup (1, 2) \cup (2, \infty)$
29. $\lim_{x \rightarrow \frac{\pi}{2}} \frac{\left[1 - \tan \left(\frac{x}{2}\right)\right] [1 - \sin x]}{\left[1 + \tan \left(\frac{x}{2}\right)\right] [\pi - 2x]^3}$ is :
- (a) $\frac{1}{8}$ (b) 0
(c) $\frac{1}{32}$ (d) ∞
30. If $\lim_{x \rightarrow 0} \frac{\log(3+x) - \log(3-x)}{x} = k$, the value of k is :
- (a) 0 (b) $-1/3$
(c) $2/3$ (d) $-2/3$

31. If $f^n(a)$, $g^n(a)$ exist and are not equal for some n . Further if $f(a) = g(a) = k$ and $\lim_{x \rightarrow a} \frac{f(a)g(x) - f(x)g(a)}{g(x) - f(x)} = 4$,

then the value of k is equal to :

- (a) 4 (b) 2
(c) 1 (d) 0

32. The function $f(x) = \log(x + \sqrt{x^2 + 1})$, is :

- (a) an even function
(b) an odd function
(c) a periodic function
(d) neither an even nor an odd function

33. If $f(x) = \begin{cases} xe^{-\left[\frac{1}{|x|} + \frac{1}{x}\right]}, & x \neq 0 \\ 0, & x = 0 \end{cases}$ then $f(x)$ is :

- (a) continuous as well as differentiable for all x
(b) continuous for all x but not differentiable at $x = 0$
(c) neither differentiable nor continuous at $x = 0$
(d) discontinuous everywhere

34. If the function $f(x) = 2x^3 - 9ax^2 + 12a^2x + 1$, where $a > 0$, attains its maximum and minimum at p and q respectively such that $p^2 = q$, then a equals :

- (a) 3 (b) 1
(c) 2 (d) 1/2

35. If $f(y) = e^y$, $g(y) = y$; $y > 0$

and $F(t) = \int_0^t f(t-y)g(y)dy$, then :

- (a) $F(t) = 1 - e^{-t}(1+t)$
(b) $F(t) = e^t - (1+t)$
(c) $F(t) = te^t$
(d) $F(t) = te^{-t}$

36. If $f(a+b-x) = f(x)$, then $\int_a^b x f(x) dx$ is equal to :

- (a) $\frac{a+b}{2} \int_a^b f(b-x) dx$
(b) $\frac{a+b}{2} \int_a^b f(x) dx$
(c) $\frac{b-a}{2} \int_a^b f(x) dx$
(d) $\frac{a+b}{2} \int_a^b f(a+b+x) dx$

37. The value of $\lim_{x \rightarrow 0} \frac{\int_0^{x^2} \sec^2 t dt}{x \sin x}$ is :

- (a) 3 (b) 2
(c) 1 (d) -1

38. The value of the integral $I = \int_0^1 x(1-x)^n dx$ is :

- (a) $\frac{1}{n+1}$ (b) $\frac{1}{n+2}$
(c) $\frac{1}{n+1} - \frac{1}{n+2}$ (d) $\frac{1}{n+1} + \frac{1}{n+2}$

39. $\lim_{n \rightarrow \infty} \frac{1 + 2^4 + 3^4 + \dots + n^4}{n^5}$
- $\lim_{n \rightarrow \infty} \frac{1 + 2^3 + 3^3 + \dots + n^3}{n^5}$ is :

- (a) 1/30 (b) 0
(c) 1/4 (d) 1/5

40. Let $\frac{d}{dx} F(x) = \left(\frac{e^{\sin x}}{x}\right)$, $x > 0$.

If $\int_1^4 \frac{3}{x} e^{\sin x^3} dx = F(k) - F(1)$,

then one of the possible values of k , is :

- (a) 15 (b) 16
(c) 63 (d) 64

41. The area of the region bounded by the curves $y = |x-1|$ and $y = 3-|x|$ is :

- (a) 2 sq unit (b) 3 sq unit
(c) 4 sq unit (d) 6 sq unit

42. Let $f(x)$ be a function satisfying $f'(x) = f(x)$ with $f(0) = 1$ and $g(x)$ be a function that satisfies $f(x) + g(x) = x^2$. Then the value of the integral $\int_0^1 f(x)g(x) dx$, is :

- (a) $e - \frac{e^2}{2} - \frac{5}{2}$ (b) $e + \frac{e^2}{2} - \frac{3}{2}$
(c) $e - \frac{e^2}{2} - \frac{3}{2}$ (d) $e + \frac{e^2}{2} + \frac{5}{2}$

43. The degree and order of the differential equation of the family of all parabolas whose axis is x -axis, are respectively :

- (a) 2, 1 (b) 1, 2
(c) 3, 2 (d) 2, 3

44. The solution of the differential equation

$$(1 + y^2) + (x - e^{\tan^{-1} y}) \frac{dy}{dx} = 0, \text{ is :}$$

- (a) $(x-2) = ke^{-\tan^{-1} y}$
(b) $2x e^{\tan^{-1} y} = e^{2 \tan^{-1} y} + k$
(c) $x e^{\tan^{-1} y} = \tan^{-1} y + k$
(d) $x e^{2 \tan^{-1} y} = e^{\tan^{-1} y} + k$

45. If the equation of the locus of a point equidistant from the points (a_1, b_1) and (a_2, b_2) is $(a_1 - a_2)x + (b_1 - b_2)y + c = 0$, then the value of 'C' is :

- (a) $\frac{1}{2}(a_2^2 + b_2^2 - a_1^2 - b_1^2)$
(b) $a_1^2 - a_2^2 + b_1^2 - b_2^2$

- (c) $\frac{1}{2}(a_1^2 + a_2^2 + b_1^2 + b_2^2)$
 (d) $\sqrt{a_1^2 + b_1^2 - a_2^2 - b_2^2}$
46. Locus of centroid of the triangle whose vertices are $(a \cos t, a \sin t)$, $(b \sin t, -b \cos t)$ and $(1, 0)$, where t is a parameter, is :
 (a) $(3x - 1)^2 + (3y)^2 = a^2 - b^2$
 (b) $(3x - 1)^2 + (3y)^2 = a^2 + b^2$
 (c) $(3x + 1)^2 + (3y)^2 = a^2 + b^2$
 (d) $(3x + 1)^2 + (3y)^2 = a^2 - b^2$
47. If the pair of straight lines $x^2 - 2pxy - y^2 = 0$ and $x^2 - 2qxy - y^2 = 0$ be such that each pair bisects the angle between the other pair, then :
 (a) $p = q$ (b) $p = -q$
 (c) $pq = 1$ (d) $pq = -1$
48. A square of side a lies above the x -axis and has one vertex at the origin. The side passing through the origin makes an angle α ($0 < \alpha < \frac{\pi}{4}$) with the positive direction of x -axis. The equation of its diagonal not passing through the origin is :
 (a) $y(\cos \alpha - \sin \alpha) - x(\sin \alpha - \cos \alpha) = a$
 (b) $y(\cos \alpha + \sin \alpha) + x(\sin \alpha - \cos \alpha) = a$
 (c) $y(\cos \alpha + \sin \alpha) + x(\sin \alpha + \cos \alpha) = a$
 (d) $y(\cos \alpha + \sin \alpha) + x(\cos \alpha - \sin \alpha) = a$
49. If the two circles $(x - 1)^2 + (y - 3)^2 = r^2$ and $x^2 + y^2 - 8x + 2y + 8 = 0$ intersect in two distinct points, then :
 (a) $2 < r < 8$ (b) $r < 2$
 (c) $r = 2$ (d) $r > 2$
50. The lines $2x - 3y = 5$ and $3x - 4y = 7$ are diameters of a circle having area as 154 sq unit. Then the equation of the circle is :
 (a) $x^2 + y^2 + 2x - 2y = 62$
 (b) $x^2 + y^2 + 2x - 2y = 47$
 (c) $x^2 + y^2 - 2x + 2y = 47$
 (d) $x^2 + y^2 - 2x + 2y = 62$
51. The normal at the point $(bt_1^2, 2bt_1)$ on a parabola meets the parabola again in the point $(bt_2^2, 2bt_2)$, then :
 (a) $t_2 = -t_1 - \frac{2}{t_1}$ (b) $t_2 = -t_1 + \frac{2}{t_1}$
 (c) $t_2 = t_1 - \frac{2}{t_1}$ (d) $t_2 = t_1 + \frac{2}{t_1}$
52. The foci of the ellipse $\frac{x^2}{16} + \frac{y^2}{b^2} = 1$ and the hyperbola $\frac{x^2}{144} - \frac{y^2}{81} = \frac{1}{25}$ coincide. Then the value of b^2 is :
 (a) 1 (b) 5
 (c) 7 (d) 9
53. A tetrahedron has vertices at $O(0, 0, 0)$, $A(1, 2, 1)$, $B(2, 1, 3)$ and $C(-1, 1, 2)$. Then the angle between the faces OAB and ABC will be :
 (a) $\cos^{-1}\left(\frac{19}{35}\right)$ (b) $\cos^{-1}\left(\frac{17}{31}\right)$
 (c) 30° (d) 90°
54. The radius of the circle in which the sphere $x^2 + y^2 + z^2 + 2x - 2y - 4z - 19 = 0$ is cut by the plane $x + 2y + 2z + 7 = 0$ is :
 (a) 1 (b) 2
 (c) 3 (d) 4
55. The lines $\frac{x-2}{1} = \frac{y-3}{1} = \frac{z-4}{-k}$ and $\frac{x-1}{k} = \frac{y-4}{2} = \frac{z-5}{1}$ are coplanar if :
 (a) $k = 0$ or -1 (b) $k = 1$ or -1
 (c) $k = 0$ or -3 (d) $k = 3$ or -3
56. The two lines $x = ay + b$, $z = cy + d$ and $x = a'y + b'$, $z = c'y + d'$ will be perpendicular, if and only if :
 (a) $aa' + bb' + cc' + 1 = 0$
 (b) $aa' + bb' + cc' = 0$
 (c) $(a + a')(b + b') + (c + c') = 0$
 (d) $aa' + cc' + 1 = 0$
57. The shortest distance from the plane $12x + 4y + 3z = 327$ to the sphere $x^2 + y^2 + z^2 + 4x - 2y - 6z = 155$ is :
 (a) 26 (b) $11\frac{4}{13}$
 (c) 13 (d) 39
58. Two systems of rectangular axes have the same origin. If a plane cuts them at distances a, b, c and a', b', c' from the origin, then :
 (a) $\frac{1}{a^2} + \frac{1}{b^2} + \frac{1}{c^2} + \frac{1}{a'^2} + \frac{1}{b'^2} + \frac{1}{c'^2} = 0$
 (b) $\frac{1}{a^2} + \frac{1}{b^2} - \frac{1}{c^2} + \frac{1}{a'^2} + \frac{1}{b'^2} - \frac{1}{c'^2} = 0$
 (c) $\frac{1}{a^2} - \frac{1}{b^2} - \frac{1}{c^2} + \frac{1}{a'^2} - \frac{1}{b'^2} - \frac{1}{c'^2} = 0$
 (d) $\frac{1}{a^2} + \frac{1}{b^2} + \frac{1}{c^2} - \frac{1}{a'^2} - \frac{1}{b'^2} - \frac{1}{c'^2} = 0$

59. $\vec{a}, \vec{b}, \vec{c}$ are three vectors, such that $\vec{a} + \vec{b} + \vec{c} = \vec{0}$, $|\vec{a}| = 1$, $|\vec{b}| = 2$, $|\vec{c}| = 3$, then $\vec{a} \cdot \vec{b} + \vec{b} \cdot \vec{c} + \vec{c} \cdot \vec{a}$ is equal to :

- (a) 0 (b) -7
(c) 7 (d) 1

60. If \vec{u}, \vec{v} and \vec{w} are three non-coplanar vectors, then $(\vec{u} + \vec{v} - \vec{w}) \cdot [(\vec{u} - \vec{v}) \times (\vec{v} - \vec{w})]$ equals :

- (a) 0 (b) $\vec{u} \cdot \vec{v} \times \vec{w}$
(c) $\vec{u} \cdot \vec{w} \times \vec{v}$ (d) $3\vec{u} \cdot \vec{v} \times \vec{w}$

61. Consider points A, B, C and D with position vectors $7\hat{i} - 4\hat{j} + 7\hat{k}$, $\hat{i} - 6\hat{j} + 10\hat{k}$,

$-\hat{i} - 3\hat{j} + 4\hat{k}$ and $5\hat{i} - \hat{j} + 5\hat{k}$ respectively.

Then ABCD is a :

- (a) square
(b) rhombus
(c) rectangle
(d) parallelogram but not a rhombus

62. The vectors $\vec{AB} = 3\hat{i} + 4\hat{k}$, and

$\vec{AC} = 5\hat{i} - 2\hat{j} + 4\hat{k}$ are the sides of a triangle ABC. The length of the median through A is :

- (a) $\sqrt{18}$ (b) $\sqrt{72}$
(c) $\sqrt{33}$ (d) $\sqrt{288}$

63. A particle acted on by constant forces $4\hat{i} + \hat{j} - 3\hat{k}$ and $3\hat{i} + \hat{j} - \hat{k}$ is displaced from the point $\hat{i} + 2\hat{j} + 3\hat{k}$ to the point $5\hat{i} + 4\hat{j} + \hat{k}$.

The total work done by the forces is :

- (a) 20 unit (b) 30 unit
(c) 40 unit (d) 50 unit

64. Let $\vec{u} = \hat{i} + \hat{j}$, $\vec{v} = \hat{i} - \hat{j}$ and $\vec{w} = \hat{i} + 2\hat{j} + 3\hat{k}$.

If \hat{n} is a unit vector such that $\vec{u} \cdot \hat{n} = 0$ and

$\vec{v} \cdot \hat{n} = 0$, then $|\vec{w} \cdot \hat{n}|$ is equal to :

- (a) 0 (b) 1
(c) 2 (d) 3

65. The median of a set of 9 distinct observations is 20.5. If each of the largest 4 observations of the set is increased by 2, then the median of the new set :

- (a) is increased by 2
(b) is decreased by 2
(c) is two times the original median
(d) remains the same as that of the original set

66. In an experiment with 15 observations on x, the following results were available

$$\sum x^2 = 2830, \sum x = 170.$$

One observation that was 20, was found to be wrong and was replaced by the correct value 30. Then the corrected variance is :

- (a) 78.00 (b) 188.66
(c) 177.33 (d) 8.33

67. Five horses are in a race. Mr. A selects two of the horses at random and bets on them. The probability that Mr. A selected the winning horse, is :

- (a) $\frac{4}{5}$ (b) $\frac{3}{5}$
(c) $\frac{1}{5}$ (d) $\frac{2}{5}$

68. Events A, B, C are mutually exclusive events such that $P(A) = \frac{3x+1}{3}$, $P(B) = \frac{1-x}{4}$ and

$P(C) = \frac{1-2x}{2}$. The set of possible values of x

are in the interval :

- (a) $\left[\frac{1}{3}, \frac{1}{2}\right]$ (b) $\left[\frac{1}{3}, \frac{2}{3}\right]$
(c) $\left[\frac{1}{3}, \frac{13}{3}\right]$ (d) $[0, 1]$

69. The mean and variance of a random variable X having a binomial distribution are 4 and 2 respectively, then $P(X=1)$ is :

- (a) $\frac{1}{32}$ (b) $\frac{1}{16}$
(c) $\frac{1}{8}$ (d) $\frac{1}{4}$

70. The resultant of forces \vec{P} and \vec{Q} is \vec{R} . If \vec{Q} is

doubled, then \vec{R} is doubled. If the direction of

\vec{Q} is reversed, then \vec{R} is again doubled, then

$P^2 : Q^2 : R^2$ is :

- (a) 3 : 1 : 1 (b) 2 : 3 : 2
(c) 1 : 2 : 3 (d) 2 : 3 : 1

71. Let R_1 and R_2 respectively be the maximum ranges up and down an inclined plane and R be the maximum range on the horizontal plane. Then R_1, R, R_2 are in :

- (a) arithmetico-geometric progression (AGP)
(b) AP
(c) GP
(d) HP

72. A couple is of moment \vec{G} and the force forming

the couple is \vec{P} . If \vec{P} is turned through a right

angle, the moment of the couple thus formed is

\vec{H} . If instead, the forces \vec{P} is turned through an

angle α , then the moment of couple becomes :

(a) $\vec{G} \sin \alpha - \vec{H} \cos \alpha$

(b) $\vec{H} \cos \alpha + \vec{G} \sin \alpha$

(c) $\vec{G} \cos \alpha + \vec{H} \sin \alpha$

(d) $\vec{H} \sin \alpha - \vec{G} \cos \alpha$

73. Two particles start simultaneously from the same point and move along two straight lines,

one with uniform velocity \vec{u} and the other from

rest with uniform acceleration \vec{f} . Let α be the angle between their directions of motion. The relative velocity of the second particle w.r.t. the first is least after a time :

(a) $\frac{u \sin \alpha}{f}$

(b) $\frac{f \cos \alpha}{u}$

(c) $u \sin \alpha$

(d) $\frac{u \cos \alpha}{f}$

74. Two stones are projected from the top of a cliff h metres high, with the same speed u so as to hit the ground at the same spot. If one of the stones is projected horizontally and the other is projected at an angle θ to the horizontal, then $\tan \theta$ equals :

(a) $\sqrt{\frac{2u}{gh}}$

(b) $2g \sqrt{\frac{u}{h}}$

(c) $2h \sqrt{\frac{u}{g}}$

(d) $u \sqrt{\frac{2}{gh}}$

75. A body travels a distance s in t seconds. It starts from rest and ends at rest. In the first part of the journey, it moves with constant acceleration f and in the second part with constant retardation r . The value of t is given by :

(a) $2s \left(\frac{1}{f} + \frac{1}{r} \right)$

(b) $\frac{2s}{\frac{1}{f} + \frac{1}{r}}$

(c) $\sqrt{2s(f+r)}$

(d) $\sqrt{2s \left(\frac{1}{f} + \frac{1}{r} \right)}$

ANSWERS

PHYSICS AND CHEMISTRY

1. (b)	2. (a)	3. (b)	4. (a)	5. (d)	6. (a)	7. (a)	8. (d)
9. (c)	10. (b)	11. (a)	12. (c)	13. (c)	14. (d)	15. (c)	16. (a)
17. (a)	18. (c)	19. (c)	20. (b)	21. (c)	22. (d)	23. (d)	24. (b)
25. (d)	26. (a)	27. (d)	28. (c)	29. (c)	30. (b)	31. (d)	32. (a)
33. (d)	34. (c)	35. (c)	36. (a)	37. (c)	38. (d)	39. (a)	40. (d)
41. (c)	42. (a)	43. (d)	44. (a)	45. (b)	46. (a)	47. (a)	48. (b)
49. (b)	50. (c)	51. (c)	52. (d)	53. (b)	54. (d)	55. (c)	56. (b)
57. (b)	58. (a)	59. (c)	60. (a)	61. (d)	62. (b)	63. (c)	64. (a)
65. (a)	66. (b)	67. (a)	68. (d)	69. (b)	70. (c)	71. (c)	72. (a)
73. (b)	74. (d)	75. (d)	76. (b)	77. (a)	78. (b)	79. (a)	80. (b)
81. (b)	82. (c)	83. (d)	84. (d)	85. (b)	86. (c)	87. (a)	88. (b)
89. (d)	90. (b)	91. (c)	92. (c)	93. (c)	94. (b)	95. (c)	96. (b)
97. (b)	98. (c)	99. (b)	100. (c)	101. (a)	102. (b)	103. (c)	104. (a)
105. (d)	106. (a)	107. (d)	108. (d)	109. (c)	110. (b)	111. (a)	112. (c)
113. (d)	114. (b)	115. (b)	116. (c)	117. (a)	118. (c)	119. (a)	120. (b)
121. (b)	122. (a)	123. (d)	124. (b)	125. (b)	126. (b)	127. (a)	128. (d)
129. (c)	130. (a)	131. (b)	132. (b)	133. (c)	134. (c)	135. (d)	136. (b)
137. (a)	138. (d)	139. (a)	140. (c)	141. (a)	142. (b)	143. (c)	144. (a)
145. (a)	146. (d)	147. (d)	148. (c)	149. (d)	150. (c)		

MATHEMATICS

1. (c)	2. (c)	3. (d)	4. (a)	5. (b)	6. (c)	7. (c)	8. (b)
9. (a)	10. (b)	11. (b)	12. (a)	13. (a)	14. (b)	15. (b)	16. (c)
17. (d)	18. (a)	19. (a)	20. (b)	21. (a)	22. (*)	23. (a)	24. (b)
25. (c)	26. (d)	27. (c)	28. (d)	29. (c)	30. (c)	31. (a)	32. (b)
33. (b)	34. (c)	35. (b)	36. (b)	37. (c)	38. (c)	39. (d)	40. (d)
41. (c)	42. (c)	43. (b)	44. (b)	45. (a)	46. (b)	47. (d)	48. (d)
49. (a)	50. (c)	51. (a)	52. (c)	53. (a)	54. (c)	55. (c)	56. (d)
57. (c)	58. (d)	59. (b)	60. (b)	61. (*)	62. (c)	63. (c)	64. (d)
65. (d)	66. (a)	67. (d)	68. (a)	69. (a)	70. (b)	71. (d)	72. (c)
73. (d)	74. (d)	75. (d)					

(*) No option is correct in question paper.

HINTS & SOLUTIONS

Physics

1. When particle describes circular path in a magnetic field, its velocity is always perpendicular to the magnetic force.

$$\text{Power } P = \vec{F} \cdot \vec{v} = Fv \cos \theta$$

$$\text{Here, } \theta = 90^\circ$$

$$\therefore P = 0$$

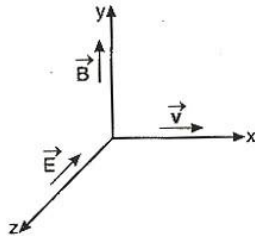
$$\text{But } P = \frac{W}{t}$$

$$\Rightarrow W = P \cdot t$$

Hence, work done

$$W = 0 \quad (\text{everywhere})$$

2. The force on a particle is



$$\text{So, } \vec{F} = q(\vec{E} + \vec{v} \times \vec{B})$$

$$\text{or } \vec{F} = \vec{F}_e + \vec{F}_m$$

$$\therefore \vec{F}_e = q\vec{E} = -16 \times 10^{-18} \times 10^4 (-\hat{k}) \\ = 16 \times 10^{-14} \hat{k}$$

$$\text{and } \vec{F}_m = -16 \times 10^{-18} (10\hat{i} \times B\hat{j}) \\ = -16 \times 10^{-17} \times B (+\hat{k}) \\ = -16 \times 10^{-17} B \hat{k}$$

Since, particle will continue to move along + x-axis, so resultant force is equal to 0.

$$\vec{F}_e + \vec{F}_m = 0 \\ \therefore 16 \times 10^{-14} = 16 \times 10^{-17} B \\ \Rightarrow B = \frac{16 \times 10^{-14}}{16 \times 10^{-17}} = 10^3 \\ B = 10^3 \text{ Wb/m}^2$$

3. When magnet is divided into two equal parts, the magnetic dipole moment.

$$M' = \text{pole strength} \times \frac{l}{2} = \frac{M}{2}$$

[pole strength remains same]

Also, the mass of magnet becomes half i. e.,

$$m' = \frac{m}{2}$$

Moment of inertia of magnet

$$I = \frac{ml^2}{12}$$

New moment of inertia

$$I' = \frac{1}{12} \left(\frac{m}{2}\right) \left(\frac{l}{2}\right)^2 = \frac{ml^2}{12 \times 8}$$

$$\therefore I' = \frac{I}{8}$$

$$\text{Now, } T = 2\pi \sqrt{\frac{I}{MB}}$$

$$T' = 2\pi \sqrt{\frac{I'}{M'B}} = 2\pi \sqrt{\frac{I/8}{MB/2}}$$

$$\therefore T' = \frac{T}{2} \Rightarrow \frac{T'}{T} = \frac{1}{2}$$

$$4. \quad W = MB(1 - \cos \theta) \\ \Rightarrow W = MB(1 - \cos 60^\circ) \quad (\because \theta = 60^\circ)$$

$$\Rightarrow W = \frac{MB}{2}$$

$$\therefore MB = 2W$$

$$\text{Torque, } \tau = MB \sin 60^\circ \\ = \frac{MB\sqrt{3}}{2} = \frac{2W\sqrt{3}}{2} \\ = W\sqrt{3}$$

5. Inside bar magnet, lines of force are from south to north.

6. At Curie temperature, a ferromagnetic substance transits into paramagnetic substance.

7. In stationary position, spring balance reading

$$= mg = 49$$

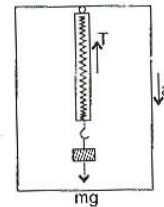
$$m = \frac{49}{9.8} = 5 \text{ kg}$$

When lift moves downward.

$$mg - T = ma$$

Reading of balance

$$T = mg - ma \\ = 5(9.8 - 5) \\ = 5 \times 4.8 \\ = 24.0 \text{ N}$$



$$8. \quad \frac{V \propto l}{E = \frac{l}{L}}$$

where, l = balance point
 L = length of potentiometer wire

$$\text{or} \quad V = \frac{l}{L} E$$

$$V = \frac{30 \times E}{100} = \frac{30}{100} E$$

9. Germanium is semiconductor, whereas copper is conductor.

For conductors, $R \propto \Delta t$

For semiconductors,

$$R \propto \frac{1}{\Delta t}$$

Hence, when both are cooled, then resistance of copper decreases whereas that of germanium increases.

10. Some of the characteristics of an optical fibre are as follows :

- (i) This works on the principle of total internal reflection.
- (ii) It consists of core made up of glass/silica/plastic with refractive index n_1 , which is surrounded by a glass or plastic cladding with refractive index n_2 ($n_2 > n_1$). The refractive index of cladding can be either changing abruptly or gradually changing (graded index fibre).
- (iii) There is a very little transmission loss through optical fibres.
- (iv) There is no interference from stray electric and magnetic fields to the signals through optical fibres.

11. Thermo-emf of thermocouple = $25 \mu\text{V}/^\circ\text{C}$.

Let θ be the smallest temperature difference.

Therefore, after connecting the thermocouple with the galvanometer, thermo-emf

$$E = (25 \mu\text{V}/^\circ\text{C}) \times \theta (^\circ\text{C})$$

$$= 25\theta \times 10^{-6} \text{ V}$$

Potential drop developed across the galvanometer

$$= iR = 10^{-5} \times 40 = 4 \times 10^{-4} \text{ V}$$

$$\therefore 4 \times 10^{-4} = 25\theta \times 10^{-6}$$

$$\theta = \frac{4}{25} \times 10^2 = 16^\circ\text{C}$$

12. According to Faraday's law of electrolysis,

$$m = zit$$

$$\frac{m_{\text{Zn}}}{m_{\text{Cu}}} = \frac{z_{\text{Zn}}}{z_{\text{Cu}}}$$

$$\frac{0.13}{m_{\text{Cu}}} = \frac{32.5}{31.5}$$

$$m_{\text{Cu}} = 0.126 \text{ g}$$

13. As we know that formula of velocity is

$$v = \frac{1}{\sqrt{\mu_0 \epsilon_0}}$$

$$\therefore v^2 = \frac{1}{\mu_0 \epsilon_0} = [\text{LT}^{-1}]^2$$

$$\frac{1}{\mu_0 \epsilon_0} = [\text{L}^2 \text{T}^{-2}]$$

14. Mass of disc (X), $m_X = \pi R^2 t \rho$

where, ρ = density of material of disc

$$\therefore I_X = \frac{1}{2} m_X R^2 = \frac{1}{2} \pi R^2 t \rho R^2$$

$$I_X = \frac{1}{2} \pi \rho t R^4 \quad \dots(i)$$

Mass of disc (Y)

$$m_Y = \pi (4R)^2 \frac{t}{4} \rho = 4\pi R^2 t \rho$$

$$\text{and} \quad I_Y = \frac{1}{2} m_Y (4R)^2 = \frac{1}{2} 4\pi R^2 t \rho \cdot 16R^2$$

$$\Rightarrow I_Y = 32\pi t \rho R^4 \quad \dots(ii)$$

$$\therefore \frac{I_Y}{I_X} = \frac{32\pi t \rho R^4}{\frac{1}{2} \pi \rho t R^4}$$

$$= 64$$

$$\therefore I_Y = 64 I_X$$

15. According to Kepler's law

$$T^2 \propto r^3$$

$$\text{or} \quad 5^2 \propto r^3 \quad \dots(i)$$

$$(T')^2 \propto (4r)^3 \quad \dots(ii)$$

From Eqs. (i) and (ii)

$$\frac{25}{(T')^2} = \frac{r^3}{64r^3}$$

$$T' = \sqrt{1600}$$

$$T' = 40 \text{ h}$$

16. Angular momentum

$$L = I\omega \quad \dots(i)$$

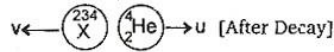
Kinetic energy

$$K = \frac{1}{2} I\omega^2 = \frac{1}{2} L\omega \quad [\text{from Eq. (i)}]$$

$$L = \frac{2K}{\omega}$$

$$\text{Now,} \quad L' = \frac{2\left(\frac{K}{2}\right)}{2\omega}$$

$$\Rightarrow L' = \frac{L}{4}$$



Apply conservation of linear momentum.

$$0 = 4u - 234v$$

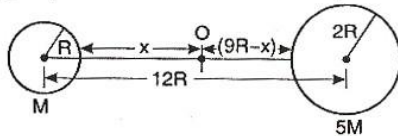
$$\Rightarrow v = \frac{4u}{234}$$

The residual nucleus will recoil with a velocity of $\frac{4u}{234}$ unit.

Recoil speed of residual nucleus is $\frac{4u}{234}$.

Note : If they will ask the recoil velocity, then answer remains same i.e., $\frac{4u}{234}$ and not $-\frac{4u}{234}$ as the word recoil itself is signifying the direction of motion of residual nucleus.

19. Let at 'O' there will be a collision. If smaller sphere moves x distance to reach at O, then bigger sphere will move a distance of $(9R - x)$.



$$F = \frac{GM \times 5M}{(12R - x)^2}$$

$$a_{\text{small}} = \frac{F}{M} = \frac{G \times 5M}{(12R - x)^2}$$

$$a_{\text{big}} = \frac{F}{5M} = \frac{GM}{(12R - x)^2}$$

$$x = \frac{1}{2} a_{\text{small}} t^2 = \frac{1}{2} \frac{G \times 5M}{(12R - x)^2} t^2 \quad \dots (i)$$

$$(9R - x) = \frac{1}{2} a_{\text{big}} t^2 = \frac{1}{2} \frac{GM}{(12R - x)^2} t^2 \quad \dots (ii)$$

Thus, dividing Eq. (i) by Eq. (ii), we get

$$\therefore \frac{x}{9R - x} = 5$$

$$\Rightarrow x = 45R - 5x$$

$$\Rightarrow 6x = 45R$$

$$\Rightarrow x = 7.5R$$

20. The difference in the variation of resistance with temperature in metal and semiconductor is caused due to difference in the variation of the number of charge carriers with temperature.

21. $v^2 = u^2 + 2as$

$$0 = \left(50 \times \frac{5}{18}\right)^2 + 2a \times 6$$

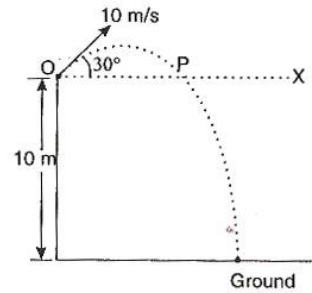
$$a = -16 \text{ m/s}^2 \quad (a = \text{retardation})$$

Again $v^2 = u^2 + 2as$

$$0 = \left(100 \times \frac{5}{18}\right)^2 - 16 \times 2 \times s$$

$$s = \frac{(100 \times 5)^2}{18 \times 18 \times 32} = 24.1 \approx 24 \text{ m}$$

22. The ball will be at point P when it is at a height of 10 m from the ground. So, we have to find the distance OP, which can be calculated directly by considering it as a projectile on a levelled plane (OX).

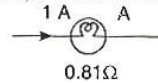


$$OP = R = \frac{u^2 \sin 2\theta}{g} = \frac{10^2 \times \sin (2 \times 30^\circ)}{10}$$

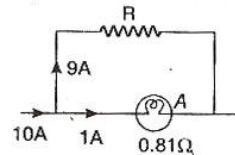
$$= \frac{10\sqrt{3}}{2} = 5\sqrt{3}$$

$$= 8.66 \text{ m}$$

23. To increase the range of ammeter we have to connect a small resistance in parallel (shunt), let its value be R .



Apply KCL at junction to divide the current.



Voltage across R = Voltage across ammeter.

$$\Rightarrow 9R = 0.81 \times 1$$

$$\Rightarrow R = \frac{0.81}{9} = 0.09 \Omega$$

24. Planck's constant (h) = $J - s$ [ML²T⁻²] [T] [ML²T⁻¹]

Momentum (p) kg - m - s⁻¹

$$= [M][L][T^{-1}] = [MLT^{-1}]$$

25. Resultant force is zero, as three forces acting on the particle can be represented in magnitude and direction by three sides of a triangle in same order. Hence, by Newton's 2nd law

$\left(\vec{F} = m \frac{d\vec{v}}{dt} \right)$, particle velocity (\vec{v}) will be same.

26. [From Gauss law, $\frac{\text{Charge enclosed}}{\epsilon_0}$
= Flux leaving the surface]
 $\frac{q}{\epsilon_0} = \phi_2 - \phi_1$
 $\Rightarrow q = (\phi_2 - \phi_1) \epsilon_0$

27. Let R be the normal contact force by wall on the block.

$R = 10 \text{ N}$

$f_i = w$ and $f = \mu R$

$\therefore \mu R = w$

$\Rightarrow w = 0.2 \times 10 = 2 \text{ N}$

28. Let coefficient of friction

be μ , then retardation will be μg .

From equation of motion, $v = u + at$

$\Rightarrow 0 = 6 - \mu g \times 10$

$\Rightarrow \mu = \frac{6}{100} = 0.06$

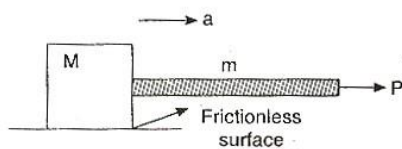
29. Here B is implying A but A is not implying B , as kinetic energy of a system of particles is zero means speed of each and every particle is zero which says that momentum of every particle is zero.

But statement A means linear momentum of a system of particles is zero, which may be true even if particles have equal and opposite momentums and hence, having non-zero KE.

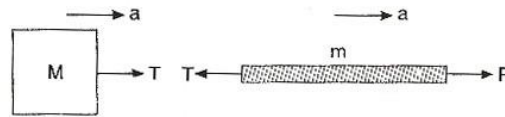
30. Mutual inductance of the pair of coils depends on distance between two coils and geometry of two coils.

31. Let acceleration of system (rope + block) is a along the direction of applied force. Then

$a = \frac{P}{M + m}$



Draw the FBD of block and rope as shown in figure.

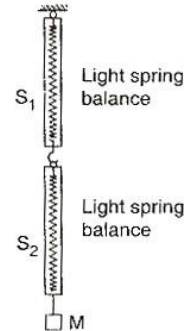


Where, T is the required parameter

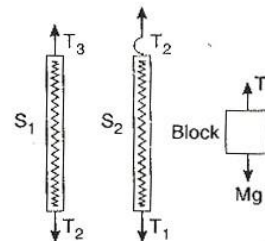
For block $T = Ma$

$\Rightarrow T = \frac{MP}{M + m}$

32. The arrangement is shown in figure.



Now, draw the free body diagram of the spring balances and block.



For equilibrium of block, $T_1 = Mg$

where, $T_1 = \text{Reading of } S_2$

For equilibrium of S_2 , $T_2 = T_1$

where, $T_2 = \text{Reading of } S_1$

For equilibrium of S_1 , $T_2 = T_3$

Hence, $T_1 = T_2 = Mg$

So, both scales read $M \text{ kg}$.

33. Elastic energy stored in the wire is

$$U = \frac{1}{2} \text{ stress} \times \text{strain} \times \text{volume}$$

$$= \frac{1}{2} \frac{F}{A} \times \frac{\Delta l}{L} \times AL$$

$$= \frac{1}{2} F \Delta l$$

$$= \frac{1}{2} \times 200 \times 1 \times 10^{-3} = 0.1 \text{ J}$$

34. The escape velocity is independent of angle of projection, hence, it will remain same i. e., 11 km/s .

$$35. \quad T = 2\pi \sqrt{\frac{M}{k}} \quad \dots(i)$$

$$T' = 2\pi \sqrt{\frac{M+m}{k}}$$

$$\Rightarrow \frac{5T}{3} = 2\pi \sqrt{\frac{M+m}{k}} \quad \dots(ii)$$

Dividing Eq. (i) by (ii), we have

$$\therefore \frac{3}{5} = \sqrt{\frac{M}{M+m}}$$

$$\frac{9}{25} = \frac{M}{M+m}$$

$$\Rightarrow 9M + 9m = 25M$$

$$\Rightarrow 16M = 9m$$

$$\frac{m}{M} = \frac{16}{9}$$

36. Heat cannot flow itself from a lower temperature to a body of higher temperature. This corresponds to second law of thermodynamics.

$$37. \quad v_{\max} = a\omega = a \frac{2\pi}{T}$$

$$= \frac{2\pi a}{2\pi \sqrt{\frac{m}{k}}} = a \sqrt{\frac{k}{m}}$$

$$\text{Hence, } \frac{v_{\max 1}}{v_{\max 2}} = \frac{a_1}{a_2} \sqrt{\frac{k_1}{k_2}}$$

$$\therefore v_{\max 1} = v_{\max 2} \quad (\text{given})$$

$$\frac{a_1}{a_2} = \sqrt{\frac{k_2}{k_1}}$$

$$38. \quad T = 2\pi \sqrt{\frac{l}{g}}$$

$$\Rightarrow \frac{\Delta T}{T} = \frac{1}{2} \frac{\Delta l}{l}$$

$$\text{Given, } \frac{\Delta l}{l} = 21\%$$

$$\therefore \frac{\Delta T}{T} = \frac{1}{2} \times 21\% = 10.5\%$$

39. The given equation of wave

$$y = 10^{-4} \sin \left(600t - 2x + \frac{\pi}{3} \right) \quad \dots(i)$$

Standard equation of wave

$$y = a \sin (\omega t - kx + \phi) \quad \dots(ii)$$

Now comparing Eqs. (i) and (ii), we get,

$$\omega = 600 \quad \text{and} \quad k = 2$$

$$\therefore \text{velocity of wave} = \frac{\omega}{k} = \frac{600}{2} = 300 \text{ m/s}$$

$$40. \quad e = -L \frac{di}{dt} = -L \frac{(-2-2)}{0.05}$$

$$8 = L \frac{(4)}{0.05}$$

$$\therefore L = \frac{8 \times 0.05}{4} = 0.1 \text{ H}$$

41. In an LC circuit the energy oscillates between inductor (in the magnetic field) and capacitor (in the electric field).

$$U_{E \max} \text{ [Maximum energy stored in capacitor]} \\ = \frac{Q^2}{2C}$$

$$U_{B \max} \text{ [Maximum energy stored in inductor]} \\ = \frac{LI_0^2}{2}$$

where, I_0 is the current at this time.

For the given instant $U_E = U_B$

$$\text{i.e., } \frac{q^2}{2C} = \frac{Li^2}{2}$$

From energy conservation

$$U_E + U_B = U_{E \max} = U_{B \max}$$

$$\Rightarrow \frac{2q^2}{2C} = \frac{Q^2}{2C}$$

$$\Rightarrow q = \frac{Q}{\sqrt{2}}$$

42. The core of transformer is laminated to reduce energy loss due to eddy currents.

$$43. \quad \vec{\tau} = \vec{r} \times \vec{F}$$

$\vec{\tau}$ is perpendicular to both \vec{r} and \vec{F} , so $\vec{r} \cdot \vec{\tau}$ as well as $\vec{F} \cdot \vec{\tau}$ has to be zero.

44. Given : $N_0 \lambda = 5000, N \lambda = 1250$

$$N = N_0 e^{-\lambda t} = N_0 e^{-5\lambda}$$

Where λ is decay constant per min

$$N \lambda = N_0 \lambda e^{-5\lambda}$$

$$1250 = N_0 \lambda e^{-5\lambda}$$

$$\therefore \frac{N_0 \lambda}{N_0 \lambda e^{-5\lambda}} = \frac{5000}{1250} = 4$$

$$e^{5\lambda} = 4$$

$$5\lambda = 2 \log_e 2$$

$$\lambda = 0.4 \ln 2$$

45. Since, 8 α -particles 4 β^- -particles and 2 β^+ -particles are emitted, so new atomic number

$$Z' = Z - 8 \times 2 + 4 \times 1 - 2 \times 1$$

$$= 92 - 16 + 4 - 2$$

$$= 92 - 14$$

$$= 78$$

46. $hf = hf_0 + \frac{1}{2}mv^2$

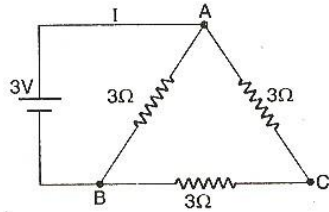
Hence, $v_1^2 = \frac{2hf_1}{m} - \frac{2hf_0}{m}$

$v_2^2 = \frac{2hf_2}{m} - \frac{2hf_0}{m}$

$\therefore v_1^2 - v_2^2 = \frac{2h}{m} [f_1 - f_2]$

47. Protons cannot be emitted by radioactive substances during their decay.

48. Resistance in the arms AC and BC are in series,



$\therefore R' = 3 + 3 = 6\Omega$
Now R' and 3Ω are in parallel,

$\therefore R_{eq} = \frac{6 \times 3}{6 + 3} = 2\Omega$

Now, $V = IR$

$\Rightarrow I = \frac{3}{2} = 1.5\text{ A}$

49. Aluminium is a metal, so when we insert an aluminium foil, equal and opposite charges appear on its two surfaces. Since, it is of negligible thickness, it will not effect the capacitance.

Alternative : From the formula

$$C = \frac{\epsilon_0 A}{d - t + \frac{t}{K}}$$

\Rightarrow Here, $K = \infty$ and $t \rightarrow 0$

So, $C = \frac{\epsilon_0 A}{d + 0} = \frac{\epsilon_0 A}{d} = C_0$

50. $x = 4(\cos \pi t + \sin \pi t)$
 $= \frac{4}{\sqrt{2}} \times \sqrt{2} [\cos \pi t + \sin \pi t]$

$x = 4\sqrt{2} \sin \left[\pi t + \frac{\pi}{4} \right]$

So, amplitude = $4\sqrt{2}$

51. At P due to shell, potential

$$V_1 = \frac{q}{4\pi \epsilon_0 R}$$

at P due to Q, potential

$$V_2 = \frac{Q}{4\pi \epsilon_0 \frac{R}{2}} = \frac{2Q}{4\pi \epsilon_0 R}$$

\therefore Net potential at P
 $V = V_1 + V_2$

$$= \frac{q}{4\pi \epsilon_0 R} + \frac{2Q}{4\pi \epsilon_0 R}$$

52. $W = \frac{1}{2} CV^2 = \frac{1}{2} \frac{q^2}{C}$
 $= \frac{1}{2} \times \frac{(8 \times 10^{-18})^2}{100 \times 10^{-6}}$
 $= \frac{1}{2} \times \frac{64 \times 10^{-36}}{100 \times 10^{-6}} = 32 \times 10^{-32} \text{ J}$

53. $x = \alpha t^3, y = \beta t^3$

$$v_x = \frac{dx}{dt} = 3\alpha t^2$$

$$v_y = \frac{dy}{dt} = 3\beta t^2$$

Resultant velocity

$$v = \sqrt{v_x^2 + v_y^2} = \sqrt{9\alpha^2 t^4 + 9\beta^2 t^4} = 3t^2 \sqrt{\alpha^2 + \beta^2}$$

54. Given: $P \propto T^3$... (i)

In an adiabatic process

$$T^\gamma P^{1-\gamma} = \text{constant}$$

$$T \propto \frac{1}{P^{(1-\gamma)/\gamma}}$$

$$T^{(\gamma/\gamma-1)} \propto P \quad \dots (ii)$$

Comparing Eqs. (i) and (ii), we get

$$\therefore \frac{\gamma}{\gamma-1} = 3$$

$$3\gamma - 3 = \gamma$$

$$2\gamma = 3$$

$$\frac{C_p}{C_v} = \gamma = \frac{3}{2}$$

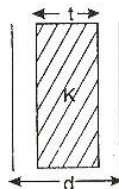
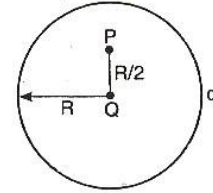
55. Work does not characterise the thermodynamic state of matter, it is a path function giving only relationship between two quantities.

56. $T_1 = 627 + 273 = 900 \text{ K}$

$$Q_1 = 3 \times 10^6 \text{ cal}$$

$$T_2 = 27 + 273 = 300 \text{ K}$$

$$\therefore \frac{Q_1}{T_1} = \frac{Q_2}{T_2}$$



$$\Rightarrow Q_2 = \frac{T_2}{T_1} \times Q_1 = \frac{300}{900} \times 3 \times 10^6$$

$$= 1 \times 10^6 \text{ cal}$$

$$\text{Work done} = Q_1 - Q_2$$

$$= 3 \times 10^6 - 1 \times 10^6 = 2 \times 10^6 \text{ cal}$$

$$= 2 \times 4.2 \times 10^6 \text{ J} = 8.4 \times 10^6 \text{ J}$$

$$57. W_1 = \frac{1}{2} k x_1^2 = \frac{1}{2} \times 5 \times 10^3 \times (5 \times 10^{-2})^2$$

$$= 6.25 \text{ J}$$

$$W_2 = \frac{1}{2} k (x_1 + x_2)^2$$

$$= \frac{1}{2} \times 5 \times 10^3 (5 \times 10^{-2} + 5 \times 10^{-2})^2$$

$$= 25 \text{ J}$$

$$\text{Net work done} = W_2 - W_1$$

$$= 25 - 6.25 = 18.75 \text{ J}$$

$$= 18.75 \text{ N-m}$$

58. The wire will vibrate with the same frequency as that of source. This can be considered as an example of forced vibration.

$$T = 10 \times 9.8 \text{ N} = 98 \text{ N},$$

$$m = 9.8 \times 10^{-3} \text{ kg/m}$$

$$\text{Frequency of wire } f = \frac{1}{2L} \sqrt{\frac{T}{m}}$$

$$= \frac{1}{2 \times 1} \sqrt{\left(\frac{98}{9.8 \times 10^{-3}}\right)}$$

$$= 50 \text{ Hz}$$

$$59. f_1 = 256 \text{ Hz}$$

For tuning fork $f_2 - f_1 = \pm 5$,

$f_2 =$ frequency of piano

$$f_2 = (256 + 5) \text{ Hz, or } (256 - 5) \text{ Hz}$$

When tension is increased, the beat frequency decreases to 2 beats/s.

If we assume that the frequency of piano string is 261 Hz, then on increasing tension, frequency, more than 261 Hz. But it is given that beat frequency decreases to 2, therefore 261 is not possible.

Hence, 251 Hz i.e., 256-5 was the frequency of piano string before increasing tension.

60. At $x = 0$, kinetic energy is maximum and potential energy is minimum.

$$61. \frac{3}{2} kT = 7.7 \times 10^{-14} \text{ J}$$

$$T = \frac{2 \times 7.7 \times 10^{-14}}{3 \times 1.38 \times 10^{-23}}$$

$$= 3.7 \times 10^9 \text{ K}$$

62. As ${}_{55}\text{Cs}^{133}$ has larger size among the four atoms given, thus, electrons present in the outermost orbit will be away from the nucleus and the electrostatic force experienced by electrons due

to nucleus will be minimum. Therefore, the energy required to liberate electrons from outer orbit will be minimum in case of ${}_{55}\text{Cs}^{133}$.

64. Due to the reverse biasing the width of depletion region increases and current flowing through the diode is almost zero. And in this case electric field is almost zero at the middle of the depletion region.

$$65. E = -Z^2 \frac{13.6}{n^2} \text{ eV}$$

For first excited state

$$E_2 = -3^2 \times \frac{13.6}{4}$$

$$= -30.6 \text{ eV}$$

Ionisation energy for first excited state of Li^{2+} is 30.6 eV.

66. $P =$ constant

$$\Rightarrow Fv = P$$

[$\because P =$ force \times velocity]

$$\Rightarrow Ma \times v = P$$

[$\because F = Ma$]

$$\Rightarrow va = \frac{P}{M}$$

$$\Rightarrow v \times \left[\frac{v dv}{ds} \right] = \frac{P}{M}$$

[$\because a = \frac{v dv}{ds}$]

$$\Rightarrow \int_0^v v^2 dv = \int_0^s \frac{P}{M} ds$$

[Assuming at $t = 0$ it starts from rest, i.e., from $s = 0$]

$$\Rightarrow \frac{v^3}{3} = \frac{P}{M} s$$

$$\Rightarrow v = \left(\frac{3P}{M} \right)^{1/3} s^{1/3}$$

$$\Rightarrow \frac{ds}{dt} = k s^{1/3}$$

[$k = \left(\frac{3P}{M} \right)^{1/3}$]

$$\Rightarrow \int_0^s \frac{ds}{s^{1/3}} = \int_0^t K dt$$

$$\Rightarrow \frac{s^{2/3}}{2/3} = Kt$$

$$\Rightarrow s^{2/3} = \frac{2}{3} Kt$$

$$\Rightarrow s = \left(\frac{2}{3} K \right)^{3/2} t^{3/2}$$

$$\Rightarrow s \propto t^{3/2}$$

67. Here, thrust force is responsible to accelerate the rocket, so initial thrust of the blast

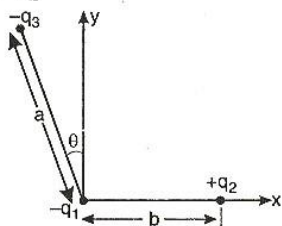
$$= ma$$

$$= 3.5 \times 10^4 \times 10$$

$$= 3.5 \times 10^5 \text{ N}$$

68. Sustained interference is possible with coherent sources only.

69. Force on $-q_1$



$$\vec{F} = \frac{1}{4\pi\epsilon_0} \frac{q_1 q_2}{b^2} \hat{i} + \frac{1}{4\pi\epsilon_0} \frac{q_1 q_3}{a^2} [\sin \theta \hat{i} - \cos \theta \hat{j}]$$

From above, x' component of force is

$$F_x = \frac{q_1}{4\pi\epsilon_0} \left[\frac{q_2}{b^2} + \frac{q_3}{a^2} \sin \theta \right]$$

$$\therefore F_x \propto \left[\frac{q_2}{b^2} + \frac{q_3}{a^2} \sin \theta \right]$$

$$70. R = \frac{V^2}{P} = \frac{(220)^2}{1000}$$

where, V and P are denoting rated voltage and power respectively

$$\therefore P_{\text{consumed}} = \frac{V_{\text{applied}}^2}{R} = \frac{110 \times 110}{220 \times 220} \times 1000 = 250 \text{ W}$$

71. Objective of compound microscope is a convex lens. Convex lens forms real and enlarged image when an object is placed between its focus and lens.

$$73. n = \frac{360^\circ}{\theta} - 1$$

$$3 = \frac{360^\circ}{\theta} - 1$$

$$\theta = 90^\circ$$

74. According to Newton's law of cooling

$$\frac{dQ}{dt} \propto \Delta\theta$$

But

$$\frac{dQ}{dt} \propto (\Delta\theta)^n$$

(given)

$$\therefore n = 1$$

75. Given: $l' = l + 100\% l = 2l$

Initial volume = final volume

$$\text{i.e. } \pi r^2 l = \pi r'^2 l'$$

$$\Rightarrow r'^2 = \frac{r^2 l}{l'} = r^2 \times \frac{l}{2l}$$

$$\Rightarrow r'^2 = \frac{r^2}{2}$$

$$\therefore R' = \rho \frac{l'}{A'} = \rho \frac{2l}{\pi r'^2} \quad \left(\because R = \frac{\rho l}{A} \right)$$

$$= \frac{\rho \cdot 4l}{\pi r^2}$$

$$= 4R$$

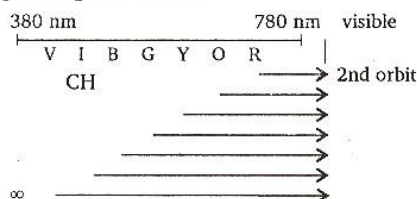
$$\text{Thus, } \Delta R = R' - R = 4R - R$$

$$= 3R$$

$$\therefore \% \Delta R = \frac{3R}{R} \times 100\% = 300\%$$

Chemistry

76. Hydrogen spectrum coloured radiation means visible radiation corresponds to Balmer series ($n_1 = 2, n_2 = 3, 4, \dots$)



3rd line from the red end it means $5 \rightarrow 2$

$$77. \lambda = \frac{h}{mv} = 1.105 \times 10^{-33} \text{ m}$$

78. For s-electron, $l = 0$.

79. Mass of one unit-cell (m) = volume \times density

$$= a^3 \times d$$

$$= a^3 \times \frac{Mz}{N_0 a^3} = \frac{Mz}{N_0}$$

$$m = \frac{58.5 \times 4}{6.02 \times 10^{23}} \text{ g}$$

$$\therefore \text{Number of unit cells in } 1 \text{ g} = \frac{1}{m}$$

$$= \frac{6.02 \times 10^{23}}{58.5 \times 4} = 2.57 \times 10^{21}$$

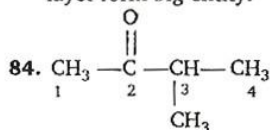
80. Glass is a supercooled liquid, which forms a non-crystalline solid. The common lime-soda glass used for bottles and jars is a supercooled mixture of sodium and calcium silicates.

81. NH_3 - an inorganic solvent.

AgI is having much higher covalent characteristics in comparison to AgCl .

82. All physical and chemical properties of elements are periodic function of atomic number - Modern periodic law.

83. C-atoms form covalently bonded plates (layers). Layers are bonded weakly together, that's why one layer can slide over other cause lubricacy. Cannot be melted easily as large number of atoms being bonded strongly in the layer form big entity.



3-methyl butan-2-one
or 3-methyl 2-butanone

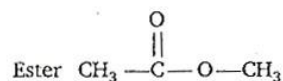
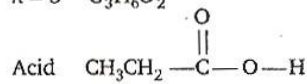
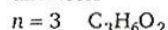
keto ($-\text{C}(=\text{O})-$) functional group is given priority.

85. LiAlH_4 reduces $-\text{COOH}$ to $-\text{CH}_2\text{OH}$ without affecting $\text{C}=\text{C}$ bond.

86. In between two successive collision, no force is acting on the gas molecules. Resultantly it travels with uniform velocity during this interval, and hence, it moves along a straight line.

87. Cu, Ag, Au group of elements are called coinage metals as these are used in minting coins.

88. $\text{C}_n\text{H}_{2n}\text{O}_2$ is general formula for open chain acid and ester



89. Alcohol has polar H which makes inter-molecular H-bonding possible. Ether is non polar hence no H-bonding. Lack of H-bonding in ether makes it more volatile than alcohol.

90. Chiral compounds which have one chiral centre. All four atoms or groups attached to carbon are different.

91. Alkaline earth metal salts are causing hardness :
Temporary hardness caused by soluble Ca and Mg hydrogen carbonates. calcium and magnesium soluble sulphates and chlorides cause permanent hardness.

92. Molecule Hybridisation Bond angle

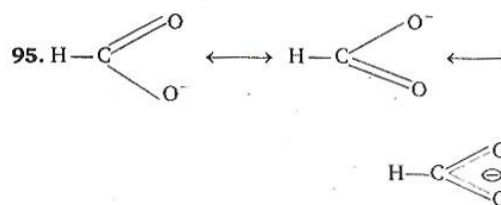
SO_2	sp^2	$lp - bp, bp - bp$	119°
OH_2	sp^3	$lp - lp, bp - lp$ $bp - bp$	104.5°
SH_2	sp^3	—do—	90°
NH_3	sp^3	$lp - bp, bp - bp$	107°

93. NO_2 and O_3 both are having irregular geometry.

94. $\text{N}^{3-} \quad 7 + 3 = 10$ electrons

$\text{F}^- \quad 9 + 1 = 10$ electrons

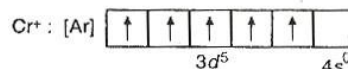
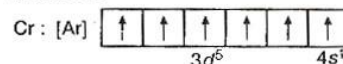
$\text{Na}^+ \quad 11 - 1 = 10$ electrons



Resonating (canonical) structures of formate ion

96. In CO_2 , C-atom is sp -hybridised thus it has linear structure.

In XeF_2 , Xe is sp^3d hybridised with three lone-pairs of electrons on equatorial position. This minimises repulsion hence it has also linear structure.

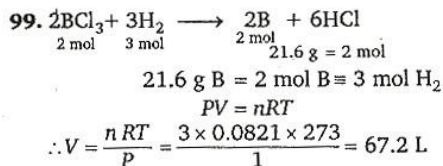


97.

(by first IP)

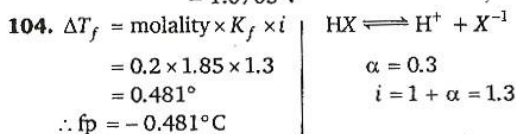
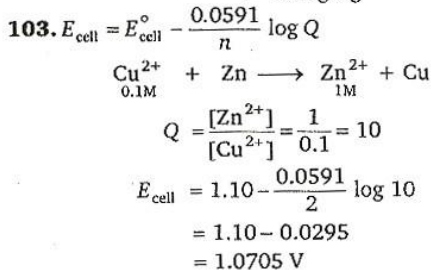
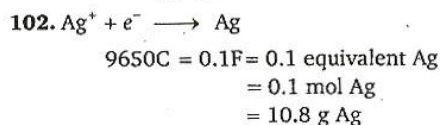
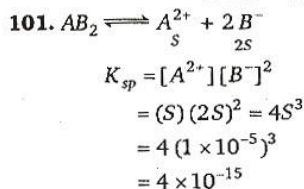
This is stable EC hence formation of Cr^{2+} by second IP requires maximum enthalpy.

$\Delta n_g = -ve$	$\Delta H^\circ = -ve$
Takes place with decrease in number of mole or pressure hence increase in pressure shifts equilibrium in forward side.	Takes place with evolution of heat or increase in temperature hence decrease in temperature shifts this equilibrium in forward side.



$$100. K_c = \frac{[\text{NO}_2]^2}{[\text{N}_2\text{O}_4]} = \frac{(1.2 \times 10^{-2})^2}{4.8 \times 10^{-2}}$$

$$= 3 \times 10^{-3} \text{ mol L}^{-1}$$



105. Rate becomes x^y times if concentration is made x times of a reactant giving y^{th} order reaction.

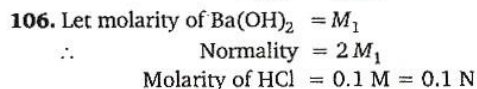
$$\text{Rate} = k[\text{A}]^n[\text{B}]^m$$

Concentration of A is doubled hence $x = 2$, $y = n$ and rate becomes $= 2^n$ times

Concentration of B is halved, hence $x = 1/2$ and

$y = m$ and rate becomes $= \left(\frac{1}{2}\right)^m$ times

Net rate becomes $= (2)^n \left(\frac{1}{2}\right)^m$ times
 $= (2)^{n-m}$ times

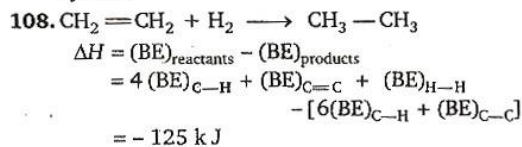


$$N_1V_1 = N_2V_2$$

$$2M_1 \times 25 = 0.1 \times 35$$

$$M_1 = 0.07 \text{ M}$$

107. $\Delta G^\circ = -W_{\text{max}}$. Maximum work done by the system.



109. Enthalpy change is state function and depends only on initial and final condition do not depend on path or intermediates.

110. High pressure inside the cooker increases boiling point, thus heat consistently given is used up by food material instead in boiling and constant boiling evaporation.

111. Ideal solution $\Delta H = 0$
 $\Delta V = 0$

$$F_{A-A} = F_{B-B} = F_{A-B}$$

$$112. \left(\frac{dx}{dt}\right) = k[\text{NO}]^2[\text{O}_2]$$

$$= k\left(\frac{n_{\text{NO}}}{V}\right)^2\left(\frac{n_{\text{O}_2}}{V}\right)$$

$$\left(\frac{dx}{dt}\right) = \frac{k}{V^3}(n_{\text{NO}})^2(n_{\text{O}_2})$$

$$\left(\frac{dx}{dt}\right) = \frac{k(n_{\text{NO}})^2(n_{\text{O}_2})}{\left(\frac{V}{2}\right)^3}$$

$$= 8\left(\frac{dx}{dt}\right)$$

$$113. E_{\text{cell}}^\circ = \frac{2.303RT}{nF} \log K_{\text{eq}}$$

$$0.295 = \frac{0.0591}{2} \log K_{\text{eq}}$$

$$\therefore \log K_{\text{eq}} = 10$$

$$\therefore K_{\text{eq}} = 10^{10}$$

114. An irreversible process

\Rightarrow spontaneous process

$\Rightarrow (dS)_{VE}$ (change in entropy) $= +ve > 0$

$\Rightarrow (dG)_{T,P}$ (change in Gibbs free energy)

$-ve \Rightarrow < 0$

115. As temperature increases desorption increases.

Adsorbent + Adsorbate \rightleftharpoons Adsorbed state + ΔE

Adsorption is exothermic process (forward direction), desorption is endothermic process (Backward direction)

According to Le-Chatelier's principle increase in temperature favours endothermic process.

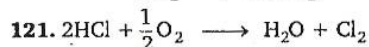
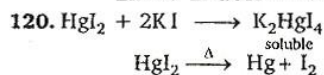
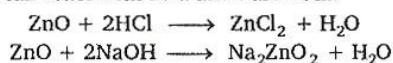
116. $k = A e^{-E_a/RT}$
 k = Rate constant
 A = Pre-exponential, frequency factor
 E_a = Activation energy
 R = Gas constant
 T = Temperature

117. More -ve value of E° means larger reducing power.

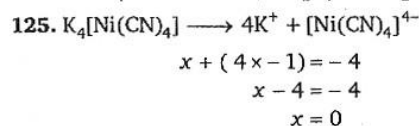
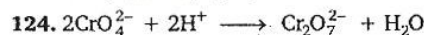
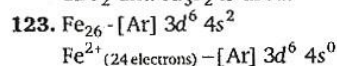
118. Proton affinity it means affinity for proton i.e., basicity

NH_3 -Nitrogen has pair of electron to donate as well as higher tendency to donate due to lower electronegativity. P is not suitable as that has larger size.

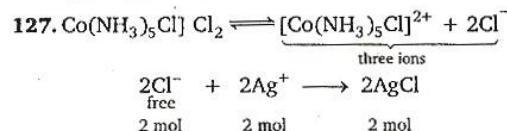
119. ZnO can react with acid and base both.



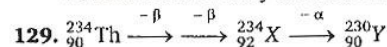
122. In Holmes signals of the ship mixture of CaC_2 and Ca_3P_2 is used.



126. The pair of electron present with nitrogen will not be available to be donated as H^+ will consume that one.



128. Due to lanthanide contraction there occurs net decrease in size. Only one 0.85 \AA is smaller one.



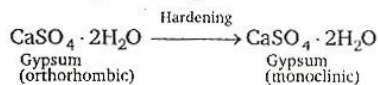
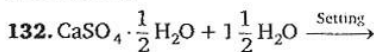
130. $C = C_0 \left(\frac{1}{2}\right)^y$

$$y = \frac{\text{Total time}}{T_{1/2}} = \frac{18}{3} = 6$$

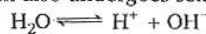
$$C_0 = 256 \text{ g}$$

$$\therefore C_{(\text{undecayed})} = 256 \left(\frac{1}{2}\right)^6 = \frac{256}{64} = 4 \text{ g}$$

131. Factual



133. $1 \times 10^{-8} \text{ M}$ HCl solution H_2O is also present there which also undergoes self ionisation



10^{-7} M at 25°C

If it is taken simply even without common ion effect, higher concentration must be considered which is 10^{-7} M but H^+ from HCl decreases self ionization which further decrease self ionization, hence, $[\text{H}^+]$ from H_2O .

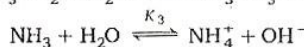
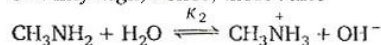
Hence, net concentration must be smaller than 10^{-7} M

Hence, acidic

134. $\text{NH}_3, \text{CH}_3\text{NH}_2, (\text{CH}_3)_2\text{NH}$

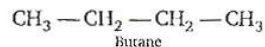
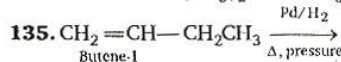
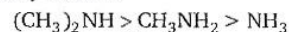


I^+ effect maximum stabilization more H-bond stability high, hence, most basic



$$K_1 > K_2 > K_3$$

Hence, basicity order is

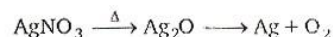
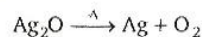
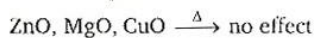


other reagents are successful with polar double bonds.

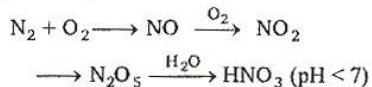
136. Solubilities of carbonates decreases down the group because lattice energy decrease is almost constant while decrease in hydration energy happens sharply. Finally difference of hydration energy and lattice energy decreases thus solubility decreases.

137. Protonation of $-\text{OH}$ is first step. Conversion of poor leaving group ($-\text{OH}$) into good leaving group ($-\text{OH}_2^+$).

138. Metal oxides lying below Hg in electrochemical series decompose to form metal.



139. During thunderstorm, there is formation of NO which changes to NO₂ and ultimately to HNO₃ (acid-rain).

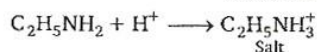
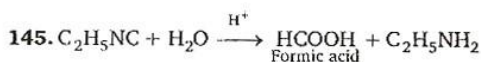
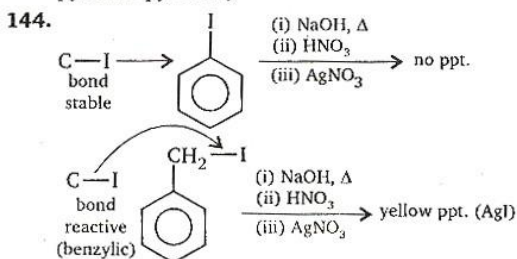


140. Partial hydrolysis of cellulose gives the disaccharide cellobiose (C₁₂H₂₂O₁₁). Cellobiose resembles maltose (which on acid catalysed hydrolysis yields two molar equivalents of D-Glucose) in every respect except one: the configuration of its glycosidic linkage.

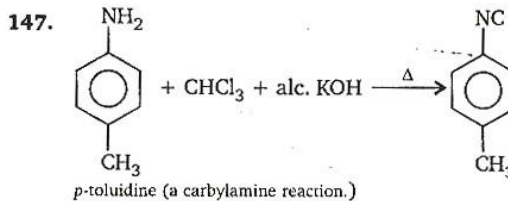
142. Calcined gypsum does not contain CaCO₃ (that's sulphate one).

143. Hydrogen bonding is involved molecular force in the DNA molecule.

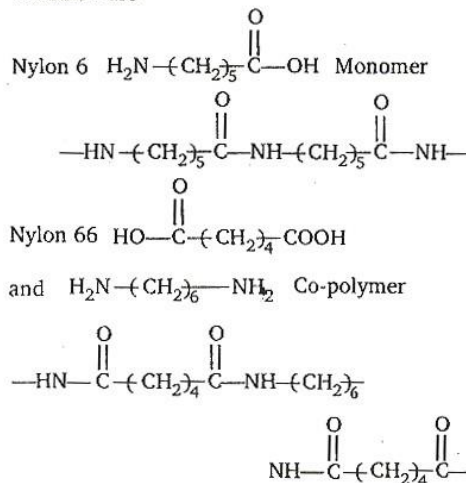
Watson and Crick observed the purine-pyrimidine type of hydrogen bonding (instead of purine-purine and pyridine-pyridine)



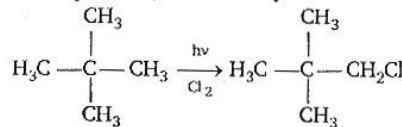
146. $\Delta E = 0$, in a cyclic process.



148. Nylon threads are made up of polyamide some common are



149. In neopentane, all H are equivalent.



150. Liquid hydrogen and liquid oxygen are good fuel.

Mathematics

$$1. f(n) = \begin{cases} \frac{n-1}{2}, & \text{when } n \text{ is odd} \\ -\frac{n}{2}, & \text{when } n \text{ is even} \end{cases}$$

and $f: N \rightarrow I$, where N is the set of natural numbers and I is the set of integers.

Let $x, y \in N$ and both are even.

Then $f(x) = f(y)$

$\Rightarrow -\frac{x}{2} = -\frac{y}{2} \Rightarrow x = y$

Again $x, y \in N$ and both are odd.

Then $f(x) = f(y)$

$\Rightarrow \frac{x-1}{2} = \frac{y-1}{2} \Rightarrow x = y$

i. e., mapping is one-one.

Since each negative integer is an image of even natural number and positive integer is an image of odd natural number. So mapping is onto. Hence, mapping is one-one onto.

2. Key Idea : If z_1, z_2 and z_3 are the vertices of an equilateral triangle. Then

$$z_1^2 + z_2^2 + z_3^2 = z_1z_2 + z_2z_3 + z_3z_1.$$

\therefore Origin, z_1 and z_2 are the vertices of an equilateral triangle, then

$$z_1^2 + z_2^2 = z_1z_2$$

$$\Rightarrow (z_1 + z_2)^2 = 3z_1z_2 \quad \dots(i)$$

Again z_1, z_2 are the roots of the equation

$$z^2 + az + b = 0,$$

then $z_1 + z_2 = -a$ and $z_1z_2 = b$

Putting these values in Eq. (i), we have

$$(-a)^2 = 3b \Rightarrow a^2 = 3b$$

3. Let $z = r_1 e^{i\theta}$ and $\omega = r_2 e^{i\phi}$

$$\Rightarrow \bar{z} = r_1 e^{-i\theta}$$

$$\text{Given } |z\omega| = 1 \Rightarrow |r_1 e^{i\theta} \cdot r_2 e^{i\phi}| = 1$$

$$\Rightarrow r_1 r_2 = 1 \quad \dots(i)$$

$$\text{and } \arg(z) - \arg(\omega) = \frac{\pi}{2}$$

$$\Rightarrow \theta - \phi = \frac{\pi}{2} \quad \dots(ii)$$

$$\text{then } \bar{z}\omega = r_1 e^{-i\theta} \cdot r_2 e^{i\phi} = r_1 r_2 e^{i(\theta-\phi)}$$

From Eq. (i) and Eq. (ii), we get

$$\begin{aligned} \bar{z}\omega &= 1 \cdot e^{-i\pi/2} \\ &= \cos \frac{\pi}{2} - i \sin \frac{\pi}{2} \\ &= -i \end{aligned}$$

Note : We know that $r(\cos \theta + i \sin \theta) = r e^{i\theta}$

$$\begin{aligned} 4. \left(\frac{1+i}{1-i}\right)^x &= \left[\frac{(1+i)(1+i)}{(1-i)(1+i)}\right]^x \\ &= \left[\frac{(1+i)^2}{1-i^2}\right]^x = \left[\frac{1-1+2i}{2}\right]^x \end{aligned}$$

$$\Rightarrow \left(\frac{1+i}{1-i}\right)^x = (i)^x = 1 \text{ (given)}$$

$$\Rightarrow (i)^x = (i)^{4n},$$

where n is any positive integer.

$$\Rightarrow x = 4n$$

Note : 4 is the least value for which $i^4 = 1$.

$$5. \begin{vmatrix} a & a^2 & 1+a^3 \\ b & b^2 & 1+b^3 \\ c & c^2 & 1+c^3 \end{vmatrix} = \begin{vmatrix} a & a^2 & 1 \\ b & b^2 & 1 \\ c & c^2 & 1 \end{vmatrix} + \begin{vmatrix} a & a^2 & a^3 \\ b & b^2 & b^3 \\ c & c^2 & c^3 \end{vmatrix} = 0$$

$$\Rightarrow \begin{vmatrix} a & a^2 & 1 \\ b & b^2 & 1 \\ c & c^2 & 1 \end{vmatrix} + abc \begin{vmatrix} a & a^2 & 1 \\ b & b^2 & 1 \\ c & c^2 & 1 \end{vmatrix} = 0$$

$$\Rightarrow (1+abc) \begin{vmatrix} a & a^2 & 1 \\ b & b^2 & 1 \\ c & c^2 & 1 \end{vmatrix} = 0 \quad \left[\because \begin{vmatrix} a & a^2 & 1 \\ b & b^2 & 1 \\ c & c^2 & 1 \end{vmatrix} \neq 0 \right]$$

$$\Rightarrow 1+abc = 0 \Rightarrow abc = -1$$

Alternative Solution :

The vectors $(1, a, a^2), (1, b, b^2), (1, c, c^2)$ are non coplanar.

\therefore Their scalar triple product $\neq 0$

$$\text{i.e., } \begin{vmatrix} 1 & a & a^2 \\ 1 & b & b^2 \\ 1 & c & c^2 \end{vmatrix} \neq 0 \quad \dots(i)$$

It is given that

$$\begin{vmatrix} a & a^2 & 1+a^3 \\ b & b^2 & 1+b^3 \\ c & c^2 & 1+c^3 \end{vmatrix} = 0$$

$$\Rightarrow \begin{vmatrix} a & a^2 & 1 \\ b & b^2 & 1 \\ c & c^2 & 1 \end{vmatrix} + \begin{vmatrix} a & a^2 & a^3 \\ b & b^2 & b^3 \\ c & c^2 & c^3 \end{vmatrix} = 0$$

$$\Rightarrow \begin{vmatrix} a & a^2 & 1 \\ b & b^2 & 1 \\ c & c^2 & 1 \end{vmatrix} + abc \begin{vmatrix} 1 & a & a^2 \\ 1 & b & b^2 \\ 1 & c & c^2 \end{vmatrix} = 0$$

$$\Rightarrow \begin{vmatrix} 1 & a & a^2 \\ 1 & b & b^2 \\ 1 & c & c^2 \end{vmatrix} + abc \begin{vmatrix} 1 & a & a^2 \\ 1 & b & b^2 \\ 1 & c & c^2 \end{vmatrix} = 0$$

$$\Rightarrow (1+abc) \begin{vmatrix} 1 & a & a^2 \\ 1 & b & b^2 \\ 1 & c & c^2 \end{vmatrix} = 0$$

$$\Rightarrow abc \neq -1 \text{ (using (i))}$$

6. Key Idea : The system of linear equations

$$a_1x + b_1y + c_1z = 0$$

$$a_2x + b_2y + c_2z = 0$$

$$\text{and } a_3x + b_3y + c_3z = 0$$

has a non-zero solution,

$$\text{if } \begin{vmatrix} a_1 & b_1 & c_1 \\ a_2 & b_2 & c_2 \\ a_3 & b_3 & c_3 \end{vmatrix} = 0.$$

The system of linear equations has a non-zero solution, then

$$\begin{vmatrix} 1 & 2a & a \\ 1 & 3b & b \\ 1 & 4c & c \end{vmatrix} = 0$$

Applying $R_2 \rightarrow R_2 - R_1, R_3 \rightarrow R_3 - R_1$

$$\begin{vmatrix} 1 & 2a & a \\ 0 & 3b-2a & b-a \\ 0 & 4c-2a & c-a \end{vmatrix} = 0$$

$$\Rightarrow (3b-2a)(c-a) - (4c-2a)(b-a) = 0$$

$$\Rightarrow 3bc - 3ba - 2ac + 2a^2 = 4bc - 2ab - 4ac + 2a^2$$

$$\Rightarrow 4ac - 2ac = 4bc - 2ab - 3bc + 3ab$$

$$\Rightarrow 2ac = bc + ab$$

On dividing by abc , we get

$$\frac{2}{b} = \frac{1}{a} + \frac{1}{c}$$

i.e., a, b, c are in HP.

7. Key Idea : If α, β be the roots of the equation

$ax^2 + bx + c = 0$, then

$$\alpha + \beta = -\frac{b}{a} \text{ and } \alpha\beta = \frac{c}{a}$$

Given equation is

$$ax^2 + bx + c = 0$$

Let α, β are the roots of this equation.

$$\text{Then } \alpha + \beta = -\frac{b}{a} \text{ and } \alpha\beta = \frac{c}{a}$$

$$\text{Also } \alpha + \beta = \frac{1}{\alpha^2} + \frac{1}{\beta^2} = \frac{\alpha^2 + \beta^2}{\alpha^2\beta^2}$$

$$\alpha + \beta = \frac{(\alpha + \beta)^2 - 2\alpha\beta}{(\alpha\beta)^2}$$

$$\Rightarrow \alpha + \beta = \left(\frac{\alpha + \beta}{\alpha\beta}\right)^2 - \frac{2}{\alpha\beta}$$

$$\Rightarrow \left(-\frac{b}{a}\right) = \left(\frac{-b/a}{c/a}\right)^2 - \frac{2}{c/a}$$

$$\Rightarrow -\frac{b}{a} = \left(\frac{b}{c}\right)^2 - \frac{2a}{c}$$

$$\Rightarrow \frac{2a}{c} = \left(\frac{b}{c}\right)^2 + \frac{b}{a}$$

$$\Rightarrow \frac{2a}{c} = \frac{b}{c} \left[\frac{b}{c} + \frac{c}{a}\right]$$

$$\Rightarrow \frac{2a}{b} = \frac{b}{c} + \frac{c}{a}$$

$\Rightarrow \frac{c}{a}, \frac{a}{b}, \frac{b}{c}$ are in AP.

$\Rightarrow \frac{a}{c}, \frac{b}{a}, \frac{c}{b}$ are in HP.

8. $x^2 - 3|x| + 2 = 0$

If $x > 0$, then $|x| = x$

therefore $x^2 - 3x + 2 = 0$

$$\Rightarrow x^2 - 2x - x + 2 = 0$$

$$\Rightarrow x(x-2) - 1(x-2) = 0$$

$$\Rightarrow (x-1)(x-2) = 0$$

$$\Rightarrow x = 1, 2$$

If $x < 0$, then $|x| = -x$

therefore $x^2 + 3x + 2 = 0$

$$\Rightarrow x^2 + 2x + x + 2 = 0$$

$$\Rightarrow x(x+2) + 1(x+2) = 0$$

$$\Rightarrow (x+1)(x+2) = 0$$

$$\Rightarrow x = -1, -2$$

Hence, four solutions are possible.

9. Key Idea : If α and 2α are the roots of the equation $ax^2 + bx + c = 0$, then $2b^2 = 9ac$.

Since one root of the quadratic equation $(a^2 - 5a + 3)x^2 + (3a - 1)x + 2 = 0$ is twice as large as the other, then

$$2(3a - 1)^2 = 2 \times 9(a^2 - 5a + 3)$$

$$\Rightarrow 9a^2 - 6a + 1 = 9a^2 - 45a + 27$$

$$\Rightarrow 45a - 6a = 27 - 1$$

$$\Rightarrow a = \frac{26}{39} = \frac{2}{3}$$

Alternate Solution

The given equation is

$$(a^2 - 5a + 3)x^2 + (3a - 1)x + 2 = 0$$

Let α and 2α are the roots of this equation, then

$$\alpha + 2\alpha = -\frac{(3a - 1)}{(a^2 - 5a + 3)}$$

$$\Rightarrow 3\alpha = -\frac{(3a - 1)}{(a^2 - 5a + 3)}$$

$$\text{and } \alpha \cdot 2\alpha = \frac{2}{(a^2 - 5a + 3)}$$

$$\Rightarrow 2\alpha^2 = \frac{2}{(a^2 - 5a + 3)}$$

$$\Rightarrow 2 \left[\frac{-(3a - 1)}{3(a^2 - 5a + 3)} \right]^2 = \frac{2}{(a^2 - 5a + 3)}$$

$$\Rightarrow \frac{(3a - 1)^2}{9(a^2 - 5a + 3)^2} = \frac{1}{(a^2 - 5a + 3)}$$

$$\Rightarrow (3a - 1)^2 = 9(a^2 - 5a + 3)$$

$$\Rightarrow 9a^2 + 1 - 6a = 9a^2 - 45a + 27$$

$$\Rightarrow 45a - 6a = 27 - 1$$

$$\Rightarrow 39a = 26$$

$$\Rightarrow a = \frac{2}{3}$$

$$\mathbf{10.} A = \begin{bmatrix} a & b \\ b & a \end{bmatrix}, A^2 = \begin{bmatrix} \alpha & \beta \\ \beta & \alpha \end{bmatrix}$$

$$A^2 = A \cdot A = \begin{bmatrix} a & b \\ b & a \end{bmatrix} \begin{bmatrix} a & b \\ b & a \end{bmatrix}$$

$$\Rightarrow A^2 = \begin{bmatrix} a^2 + b^2 & ab + ba \\ ba + ab & b^2 + a^2 \end{bmatrix}$$

$$= \begin{bmatrix} a^2 + b^2 & 2ab \\ 2ab & a^2 + b^2 \end{bmatrix}$$

$$\Rightarrow \begin{bmatrix} \alpha & \beta \\ \beta & \alpha \end{bmatrix} = \begin{bmatrix} a^2 + b^2 & 2ab \\ 2ab & a^2 + b^2 \end{bmatrix}$$

$$\Rightarrow \alpha = a^2 + b^2, \quad \beta = 2ab$$

11. The number of choices available to him

$$= {}^5C_4 \times {}^8C_6 + {}^5C_5 \times {}^8C_5$$

$$= \frac{5!}{4!1!} \times \frac{8!}{6!2!} + \frac{5!}{5!0!} \times \frac{8!}{5!3!}$$

$$= 5 \times \frac{8 \times 7}{2} + 1 \times \frac{8 \times 7 \times 6}{3 \times 2}$$

$$= 5 \times 4 \times 7 + 8 \times 7$$

$$= 140 + 56 = 196$$

12. The number of ways to sit men = $5!$

and the number of ways to sit women = ${}^6C_5 \times 5!$

$$\text{Total number of ways} = 5! \times {}^6C_5 \times 5!$$

$$= 5! \times 6 \times 5! = 6! \times 5!$$

$$13. \Delta = \begin{vmatrix} 1 & \omega^n & \omega^{2n} \\ \omega^n & \omega^{2n} & 1 \\ \omega^{2n} & 1 & \omega^n \end{vmatrix}$$

$$= 1(\omega^{3n} - 1) - \omega^n(\omega^{2n} - \omega^{2n}) + \omega^{2n}(\omega^n - \omega^{4n})$$

$$= 1(1 - 1) - 0 + \omega^{2n}(\omega^n - \omega^n) = 0$$

14. **Key Idea :** ${}^nC_{r+1} + {}^nC_r = {}^{n+1}C_{r+1}$.

$${}^nC_{r+1} + {}^nC_{r-1} + 2{}^nC_r$$

$$= {}^nC_{r+1} + {}^nC_r + {}^nC_{r-1} + {}^nC_r$$

$$= {}^{n+1}C_{r+1} + {}^{n+1}C_r$$

$$= {}^{n+2}C_{r+1}$$

15. $(r+1)$ th term of $(\sqrt{3} + \sqrt[8]{5})^{256}$

$$\text{i.e., } T_{r+1} = {}^{256}C_r (3)^{(256-r)/2} (5)^{r/8}$$

The terms are integral, if $\frac{256-r}{2}$ and $\frac{r}{8}$ are both positive integer.

$$r = 0, 8, 16, 24, 32, \dots, 256$$

Hence total terms are 33.

16. $\therefore (r+1)$ th term in the expansion of $(1+x)^{27/5}$

$$= \frac{27 \left(\frac{27}{5} - 1 \right) \dots \left(\frac{27}{5} - r + 1 \right)}{r!} x^r$$

Now this term will be negative, if the last factor in Nr. is the only one negative factor.

$$\Rightarrow \frac{27}{5} - r + 1 < 0 \Rightarrow \frac{32}{5} < r$$

$$\Rightarrow 6.4 < r \Rightarrow \text{least value of } r \text{ is } 7.$$

Thus first negative term will be 8th.

Alternate Solution

$$(1+x)^{27/5} = 1 + \frac{27}{5}x + \frac{27}{5} \left(\frac{27}{5} - 1 \right) \frac{x^2}{2!}$$

$$+ \frac{27}{5} \left(\frac{27}{5} - 1 \right) \left(\frac{27}{5} - 2 \right) \frac{x^3}{3!}$$

$$+ \frac{27}{5} \left(\frac{27}{5} - 1 \right) \left(\frac{27}{5} - 2 \right) \left(\frac{27}{5} - 3 \right) \frac{x^4}{4!}$$

$$+ \frac{27}{5} \left(\frac{27}{5} - 1 \right) \left(\frac{27}{5} - 2 \right) \left(\frac{27}{5} - 3 \right) \left(\frac{27}{5} - 4 \right) \frac{x^5}{5!}$$

$$+ \frac{27}{5} \left(\frac{27}{5} - 1 \right) \left(\frac{27}{5} - 2 \right) \left(\frac{27}{5} - 3 \right) \left(\frac{27}{5} - 4 \right) \left(\frac{27}{5} - 5 \right) \frac{x^6}{6!}$$

$$+ \frac{27}{5} \left(\frac{27}{5} - 1 \right) \left(\frac{27}{5} - 2 \right) \left(\frac{27}{5} - 3 \right) \left(\frac{27}{5} - 4 \right) \left(\frac{27}{5} - 5 \right)$$

$$\times \left(\frac{27}{5} - 6 \right) \frac{x^7}{7!} + \dots$$

Here $\frac{27}{5} - 6$ is negative i.e., 8th term is negative in the expansion of $(1+x)^{27/5}$.

$$17. \frac{1}{1 \cdot 2} - \frac{1}{2 \cdot 3} + \frac{1}{3 \cdot 4} - \dots$$

$$= \left(1 - \frac{1}{2} \right) - \left(\frac{1}{2} - \frac{1}{3} \right) + \left(\frac{1}{3} - \frac{1}{4} \right) - \dots$$

$$= 1 - 2 \cdot \frac{1}{2} + 2 \cdot \frac{1}{3} - 2 \cdot \frac{1}{4} + \dots$$

$$= 2 \left[1 - \frac{1}{2} + \frac{1}{3} - \frac{1}{4} + \dots \right] - 1$$

$$= 2 \log(1+1) - 1$$

$$= 2 \log 2 - \log e$$

$$= \log 4 - \log e$$

$$= \log \frac{4}{e}$$

18. Let $f(x) = Ax^2 + Bx + C$.

$$\therefore f(1) = A + B + C$$

$$\text{and } f(-1) = A - B + C$$

$$\therefore f(1) = f(-1)$$

$$\Rightarrow A + B + C = A - B + C$$

$$\Rightarrow 2B = 0$$

$$\Rightarrow B = 0$$

$$\therefore f(x) = Ax^2 + C$$

Now $f'(x) = 2Ax$

$$\therefore f'(a) = 2Aa, f'(b) = 2Ab, f'(c) = 2Ac$$

Also a, b, c are in AP.

$$\therefore 2Aa, 2Ab, 2Ac \text{ are in AP.}$$

$$\Rightarrow f'(a), f'(b), f'(c) \text{ are in AP.}$$

19. If x_1, x_2, x_3 and y_1, y_2, y_3 are in GP,

then let $x_2 = rx_1, x_3 = r^2x_1$

and $y_2 = ry_1, y_3 = r^2y_1$

with common ratio r , then the points are $(x_1, y_1), (rx_1, ry_1)$ and (r^2x_1, r^2y_1) .

$$\text{Now } \begin{vmatrix} x_1 & y_1 & 1 \\ x_2 & y_2 & 1 \\ x_3 & y_3 & 1 \end{vmatrix} = \begin{vmatrix} x_1 & y_1 & 1 \\ rx_1 & ry_1 & 1 \\ r^2x_1 & r^2y_1 & 1 \end{vmatrix}$$

$$= x_1y_1 \begin{vmatrix} 1 & 1 & 1 \\ r & r & 1 \\ r^2 & r^2 & 1 \end{vmatrix}$$

$$= x_1y_1(0) = 0$$

(Since two columns are identical)

Thus these points lie on a straight line.

Alternate Solution

Let $x_1 = a \Rightarrow x_2 = ar$ and $x_3 = ar^2$

and $y = b \Rightarrow y_2 = br$ and $y_3 = br^2$

Let the points are $A(a, b), B(ar, br)$ and $C(ar^2, br^2)$.

$$\text{Now slope of } AB = \frac{b(r-1)}{a(r-1)} = \frac{b}{a}$$

$$\text{and slope of } BC = \frac{b(r^2-r)}{a(r^2-r)} = \frac{b}{a}$$

\therefore slope of $AB =$ slope of BC

$$\Rightarrow AB \parallel BC$$

But B is a common point.

$\therefore A, B$ and C are collinear.

i.e., the points (x_1, y_1) , (x_2, y_2) and (x_3, y_3) lie on a straight line.

20. $AB = a$

and $ON \perp AB$
 $AN = BN$
 In ΔAON ,

$$\tan \frac{\pi}{n} = \frac{AN}{ON}$$

$$ON = AN \cot \frac{\pi}{n} = \frac{a}{2} \cot \frac{\pi}{n}$$

$$\text{and } \sin \frac{\pi}{n} = \frac{AN}{OA}$$

$$OA = AN \operatorname{cosec} \frac{\pi}{n} = \frac{a}{2} \operatorname{cosec} \frac{\pi}{n}$$

Sum of the radii = $ON + OA$

$$= \frac{a}{2} \cot \frac{\pi}{n} + \frac{a}{2} \operatorname{cosec} \frac{\pi}{n}$$

$$= \frac{a}{2} \left[\frac{\cos \frac{\pi}{n}}{\sin \frac{\pi}{n}} + \frac{1}{\sin \frac{\pi}{n}} \right]$$

$$= \frac{a}{2} \left[\frac{1 + \cos \frac{\pi}{n}}{\sin \frac{\pi}{n}} \right] = \frac{a}{2} \left[\frac{1 + 2 \cos^2 \frac{\pi}{2n} - 1}{2 \sin \frac{\pi}{2n} \cos \frac{\pi}{2n}} \right]$$

$$= \frac{a}{2} \cot \frac{\pi}{2n}$$

21. $a \cos^2 \frac{C}{2} + c \cos^2 \frac{A}{2} = \frac{3b}{2}$

$$\Rightarrow a \left[\frac{s(s-c)}{ab} \right] + c \left[\frac{s(s-a)}{bc} \right] = \frac{3b}{2}$$

$$\Rightarrow \frac{s[s-c+s-a]}{b} = \frac{3b}{2}$$

$$\Rightarrow 2s[2s-c-a] = 3b^2$$

$$\Rightarrow 2s[a+b+c-c-a] = 3b^2$$

$$\Rightarrow (a+b+c)b = 3b^2$$

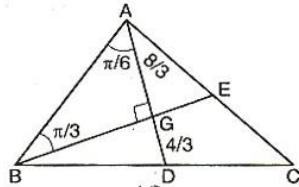
$$\Rightarrow a+b+c = 3b$$

$$\Rightarrow 2b = a+c$$

i.e., a, b, c are in AP.

Note : $\cos \frac{C}{2} = \sqrt{\frac{s(s-c)}{ab}}$ and $\cos \frac{A}{2} = \sqrt{\frac{s(s-a)}{bc}}$.

22. Given $AD = 4$ and $BD = DC$



In ΔABG , $\tan \frac{\pi}{3} = \frac{AG}{BG}$

$$BG = AG \cot \frac{\pi}{3}$$

$$BG = \frac{8}{3} \times \frac{1}{\sqrt{3}} = \frac{8}{3\sqrt{3}}$$

$$\begin{aligned} \text{Area of } \Delta ADB &= \frac{1}{2} \times BG \times AD \\ &= \frac{1}{2} \times \frac{8}{3\sqrt{3}} \times 4 = \frac{16}{3\sqrt{3}} \end{aligned}$$

Since, median divide a triangle into two triangles of equal area. Therefore

$$\begin{aligned} \text{Area of } \Delta ABC &= 2 \times \text{area of } \Delta ADB \\ &= 2 \times \frac{16}{3\sqrt{3}} = \frac{32}{3\sqrt{3}} \end{aligned}$$

23. **Key Idea :** The range of $\sin^{-1} x$ is $\left[-\frac{\pi}{2}, \frac{\pi}{2}\right]$.

We have $\sin^{-1} x = 2 \sin^{-1} a$

$$\Rightarrow -\frac{\pi}{2} \leq \sin^{-1} x \leq \frac{\pi}{2}$$

$$\Rightarrow -\frac{\pi}{2} \leq 2 \sin^{-1} a \leq \frac{\pi}{2}$$

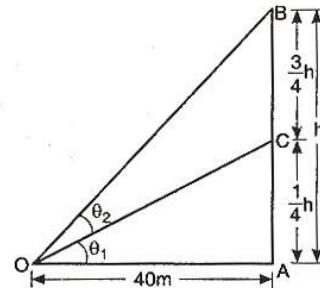
$$\Rightarrow -\frac{\pi}{4} \leq \sin^{-1} a \leq \frac{\pi}{4}$$

$$\Rightarrow \sin\left(-\frac{\pi}{4}\right) \leq a \leq \sin \frac{\pi}{4}$$

$$\Rightarrow -\frac{1}{\sqrt{2}} \leq a \leq \frac{1}{\sqrt{2}}$$

$$\Rightarrow |a| \leq \frac{1}{\sqrt{2}}$$

24. Given $\theta_2 = \tan^{-1} \frac{3}{5}$



$$\tan \theta_2 = \frac{3}{5}$$

In ΔAOC , $\tan \theta_1 = \frac{AC}{OA}$

$$= \frac{\frac{1}{4}h}{40} = \frac{h}{160}$$

In ΔAOB ,

$$\tan(\theta_1 + \theta_2) = \frac{AB}{OA} = \frac{h}{40}$$

$$\frac{\tan \theta_1 + \tan \theta_2}{1 - \tan \theta_1 \tan \theta_2} = \frac{h}{40}$$

$$\frac{\frac{h}{160} + \frac{3}{5}}{1 - \frac{h}{160} \times \frac{3}{5}} = \frac{h}{40}$$

$$\Rightarrow \frac{5[h+96]}{800-3h} = \frac{h}{40}$$

$$\Rightarrow 200[h+96] = 800h - 3h^2$$

$$\Rightarrow 200h + 19200 = 800h - 3h^2$$

$$\Rightarrow 3h^2 - 600h + 19200 = 0$$

$$\Rightarrow h^2 - 200h + 6400 = 0$$

$$\Rightarrow (h-160)(h-40) = 0$$

$$\Rightarrow h = 160 \text{ or } h = 40$$

\therefore Height of the vertical pole = 40 m.

25. $f(x) = x + \frac{1}{x}$

$$f'(x) = 1 - \frac{1}{x^2}$$

Put $f'(x) = 0$ for maxima and minima

$$\Rightarrow 1 - \frac{1}{x^2} = 0$$

$$\Rightarrow x = \pm 1$$

$$f''(x) = \frac{2}{x^3}$$

At $x = 1$, $f''(x) = +ve$
 $\therefore f(x)$ will be minimum at $x = 1$.
 Value of $f(x)$ at $x = 1$ is 2.
 But at $x = -1$ value of $f(x) = -2$
 Thus, $f(x)$ attains minimum value at $x = -1$.

26. $\sum_{r=1}^n f(r) = f(1) + f(2) + f(3) + \dots + f(n)$

$$= f(1) + 2f(1) + 3f(1) + \dots + nf(1)$$

[since $f(x+y) = f(x) + f(y)$]

$$= (1 + 2 + 3 + \dots + n) f(1)$$

$$= \frac{n(n+1)}{2} \cdot 7 = \frac{7n(n+1)}{2}$$

27. $f(x) = x^n \Rightarrow f(1) = 1$
 $f'(x) = nx^{n-1} \Rightarrow f'(1) = n$
 $f''(x) = n(n-1)x^{n-2} \Rightarrow f''(1) = n(n-1)$

.....
 $f^n(x) = n(n-1)(n-2) \dots 2 \cdot 1$
 $\Rightarrow f^n(1) = n(n-1)(n-2) \dots 2 \cdot 1$

We have

$$f(1) - \frac{f'(1)}{1!} + \frac{f''(1)}{2!} - \frac{f'''(1)}{3!} + \dots$$

$$+ \frac{(-1)^n f^n(1)}{n!}$$

$$= 1 - \frac{n}{1!} + \frac{n(n-1)}{2!} - \frac{n(n-1)(n-2)}{3!} + \dots$$

$$+ \frac{(-1)^n n(n-1)(n-2) \dots 2 \cdot 1}{n!}$$

$$= (1-1)^n = 0$$

28. $\therefore f(x) = \frac{3}{4-x^2} + \log_{10}(x^3 - x)$

For domain of $f(x)$

$$\Rightarrow x^3 - x > 0$$

$$\Rightarrow x(x-1)(x+1) > 0$$

Region is $(-1, 0) \cup (1, \infty)$
 and $4 - x^2 \neq 0$

$$\Rightarrow x \neq \pm 2$$

Region is $(-\infty, -2) \cup (-2, 2) \cup (2, \infty)$.
 \therefore Common region is $(-1, 0) \cup (1, 2) \cup (2, \infty)$.

29. $\lim_{x \rightarrow \frac{\pi}{2}} \frac{[1 - \tan \frac{x}{2}][1 - \sin x]}{[1 + \tan \frac{x}{2}][\pi - 2x]^3}$

Let $x = \frac{\pi}{2} - h$ as $x \rightarrow \frac{\pi}{2}$, $h \rightarrow 0$

$$\therefore \lim_{h \rightarrow 0} \frac{1 - \tan\left(\frac{\pi}{4} - \frac{h}{2}\right)}{1 + \tan\left(\frac{\pi}{4} - \frac{h}{2}\right)} \cdot \frac{(1 - \cos h)}{(2h)^3}$$

$$= \lim_{h \rightarrow 0} \tan \frac{h}{2} \cdot \frac{2 \sin^2 \frac{h}{2}}{8h^3}$$

$$= \lim_{h \rightarrow 0} \frac{1}{4} \cdot \frac{\tan \frac{h}{2}}{\frac{h}{2} \times 2} \times \left(\frac{\sin \frac{h}{2}}{\frac{h}{2}}\right)^2 \times \frac{1}{4}$$

$$= \lim_{h \rightarrow 0} \frac{1}{32} \cdot \left(\frac{\tan \frac{h}{2}}{\frac{h}{2}}\right) \left(\frac{\sin \frac{h}{2}}{\frac{h}{2}}\right)^2 = \frac{1}{32}$$

30. $\lim_{x \rightarrow 0} \frac{\log(3+x) - \log(3-x)}{x} = k$

Applying L' Hospital's rule

$$\Rightarrow \lim_{x \rightarrow 0} \frac{\left[\frac{1}{3+x} + \frac{1}{3-x}\right]}{1} = k$$

$$\Rightarrow \frac{1}{3} + \frac{1}{3} = k$$

$$\Rightarrow k = \frac{2}{3}$$

Note : L' Hospital's rule can be applied only, if a function is of the form of $\left(\frac{0}{0}\right)$ form.

$$31. \lim_{x \rightarrow a} \frac{f(a)g(x) - f(x)g(a)}{g(x) - f(x)} = 4$$

Applying L' Hospital rule

$$\lim_{x \rightarrow a} \frac{f(a)g'(x) - g(a)f'(x)}{g'(x) - f'(x)} = 4$$

$$\Rightarrow \lim_{x \rightarrow a} \frac{k g'(x) - k f'(x)}{g'(x) - f'(x)} = 4$$

$$\Rightarrow \frac{k = 4}{k = 4}$$

$$32. f(x) = \log(x + \sqrt{x^2 + 1})$$

$$\Rightarrow f(-x) = \log(-x + \sqrt{x^2 + 1})$$

$$\Rightarrow f(x) + f(-x) = \log(x + \sqrt{x^2 + 1}) + \log(-x + \sqrt{x^2 + 1})$$

$$= \log(1) = 0$$

Hence $f(x)$ is an odd function.

Note : A function is said to be an even function, if $f(x) = f(-x)$. Otherwise it is called an odd function.

33. Key Idea : A function is continuous in an interval $[a, b]$, if it is continuous at $x = a$ and $x = b$ and each point of interval (a, b) .

Continuity at $x = 0$

$$f(0-0) = \lim_{h \rightarrow 0} (0-h) e^{-\left(\frac{1}{-h} + \frac{1}{(-h)}\right)}$$

$$= \lim_{h \rightarrow 0} (-h) e^{-\left(\frac{1}{h} - \frac{1}{h}\right)} = \lim_{h \rightarrow 0} (-h) = 0$$

$$f(0+0) = \lim_{h \rightarrow 0} (0+h) e^{-\left(\frac{1}{|h|} + \frac{1}{h}\right)}$$

$$= \lim_{h \rightarrow 0} h e^{-\left(\frac{1}{h} + \frac{1}{h}\right)} = \lim_{h \rightarrow 0} \frac{h}{e^{2/h}} = 0$$

$$\Rightarrow f(0-0) = f(0) = f(0+0)$$

Therefore $f(x)$ is continuous for all x .

Differentiability at $x = 0$

$$Rf'(0) = \lim_{h \rightarrow 0} \frac{he^{-\left(\frac{1}{h} + \frac{1}{h}\right)} - 0}{h - 0}$$

$$= \lim_{h \rightarrow 0} \frac{1}{e^{2/h}} = 0$$

$$Lf'(0) = \lim_{h \rightarrow 0} \frac{(-h)e^{-\left(\frac{1}{h} - \frac{1}{h}\right)} - 0}{(-h) - 0}$$

$$= \lim_{h \rightarrow 0} e^0 = 1$$

$$Rf'(0) \neq Lf'(0)$$

$f(x)$ is not differentiable at $x = 0$.

$$34. \because f(x) = 2x^3 - 9ax^2 + 12a^2x + 1$$

$$f'(x) = 6x^2 - 18ax + 12a^2$$

Put $f'(x) = 0$

$$6[x^2 - 3ax + 2a^2] = 0$$

$$\Rightarrow x^2 - 3ax + 2a^2 = 0$$

$$\Rightarrow x^2 - 2ax - ax + 2a^2 = 0$$

$$\Rightarrow x(x-2a) - a(x-2a) = 0$$

$$\Rightarrow (x-a)(x-2a) = 0$$

$$\Rightarrow x = a, \quad x = 2a$$

Now $f''(x) = 12x - 18a$

at $x = a$

$$f''(x) = 12a - 18a = -6a$$

$\therefore f(x)$ will be maximum at $x = a$

i.e., $p = a$.

at $x = 2a$

$$f''(x) = 24a - 18a = 6a$$

$\therefore f(x)$ will be minimum at $x = 2a$

i.e., $q = 2a$.

Given $p^2 = q$

$$\Rightarrow a^2 = 2a \Rightarrow a = 2$$

$$35. F(t) = \int_0^t f(t-y)g(y)dy$$

$$= \int_0^t e^{t-y} \cdot y dy = e^t \cdot \int_0^t e^{-y} y dy$$

$$= e^t \left[(-ye^{-y})_0^t - \int_0^t 1(-e^{-y}) dy \right]$$

$$= e^t [(-te^{-t} - 0) - (e^{-y})_0^t]$$

$$= e^t [-te^{-t} - (e^{-t} - e^0)]$$

$$= e^t [-te^{-t} - e^{-t} + 1]$$

$$= [1 - e^{-t}(1+t)] e^t$$

$$= e^t - (1+t)$$

36. Key Idea :

$$\int_a^b x f(x) dx = \int_a^b (a+b-x) f(a+b-x) dx$$

$$\text{Let } I = \int_a^b x f(x) dx \quad \dots(i)$$

$$\Rightarrow I = \int_a^b (a+b-x) f(a+b-x) dx$$

$$\Rightarrow I = \int_a^b (a+b-x) f(x) dx$$

[Since given $f(a+b-x) = f(x)$]

$$\Rightarrow I = (a+b) \int_a^b f(x) dx - \int_a^b x f(x) dx$$

$$\Rightarrow I = (a+b) \int_a^b f(x) dx - I \quad [\text{using Eq. (i)}]$$

$$\Rightarrow 2I = (a+b) \int_a^b f(x) dx$$

$$\Rightarrow I = \left(\frac{a+b}{2}\right) \int_a^b f(x) dx$$

$$37. \lim_{x \rightarrow 0} \frac{\int_0^{x^2} \sec^2 t \, dt}{x \sin x} \quad \left(\frac{0}{0} \text{ form} \right)$$

Applying L'Hospital's rule

$$= \lim_{x \rightarrow 0} \frac{\sec^2 x^2 \cdot 2x}{x \cos x + \sin x}$$

Again applying L'Hospital's rule

$$= \lim_{x \rightarrow 0} \frac{2x \cdot 2 \sec^2 x^2 \cdot \tan x^2 \cdot 2x + 2 \sec^2 x^2}{-x \sin x + \cos x + \cos x}$$

$$= \frac{0 + 2 \sec^2 0}{0 + 2 \cos 0} = 1$$

$$38. I = \int_0^1 x(1-x)^n dx$$

Let $1-x = z \Rightarrow -dx = dz$

$$I = \int_1^0 (1-z)z^n(-dz) = \int_0^1 (1-z)z^n dz$$

$$= \int_0^1 (z^n - z^{n+1}) dz = \left[\frac{z^{n+1}}{n+1} - \frac{z^{n+2}}{n+2} \right]_0^1$$

$$= \frac{1}{n+1} - \frac{1}{n+2}$$

$$39. \text{Key Idea : } \lim_{n \rightarrow \infty} \frac{1}{n} \sum_{r=1}^n \left(\frac{r}{n} \right)^4 = \int_0^1 x^4 dx.$$

$$\lim_{n \rightarrow \infty} \frac{1 + 2^4 + 3^4 + \dots + n^4}{n^5}$$

$$= \lim_{n \rightarrow \infty} \frac{1 + 2^3 + 3^3 + \dots + n^3}{n^5}$$

$$= \lim_{n \rightarrow \infty} \frac{1}{n} \sum_{r=1}^n \left(\frac{r}{n} \right)^4$$

$$= \lim_{n \rightarrow \infty} \frac{1}{n} \times \lim_{n \rightarrow \infty} \frac{1}{n} \sum_{r=1}^n \left(\frac{r}{n} \right)^3$$

$$= \int_0^1 x^4 dx - \lim_{n \rightarrow \infty} \frac{1}{n} \times \int_0^1 x^3 dx$$

$$= \left[\frac{x^5}{5} \right]_0^1 - 0 = \frac{1}{5}$$

$$40. \frac{d}{dx} F(x) = \frac{e^{\sin x}}{x}, \quad x > 0$$

On integrating both sides, we get

$$F(x) = \int \frac{e^{\sin x}}{x} dx \quad \dots(i)$$

$$\text{Also } \int_1^4 \frac{3}{x} e^{\sin x^3} dx = \int_1^4 \frac{3x^2}{x^3} \cdot e^{\sin x^3} dx$$

$$= F(k) - F(1)$$

$$\text{Let } x^3 = z \Rightarrow 3x^2 dx = dz$$

$$\Rightarrow \int_1^{64} \frac{e^{\sin z}}{z} dz = F(k) - F(1)$$

Using Eq. (i)

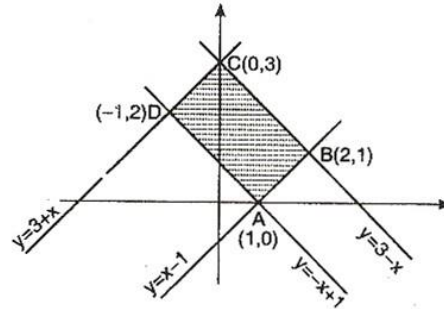
$$[F(z)]_1^{64} = F(k) - F(1)$$

$$\Rightarrow F(64) - F(1) = F(k) - F(1)$$

$$\Rightarrow k = 64$$

$$41. y = |x-1| = \begin{cases} x-1, & x > 0 \\ -x+1, & x < 0 \end{cases}$$

$$\text{and } y = 3-|x| = \begin{cases} 3+x, & x < 0 \\ 3-x, & x > 0 \end{cases}$$



Solving $y = x-1$ and $y = 3-x$

$$\Rightarrow x-1 = 3-x$$

$$\Rightarrow 2x = 4$$

$$\Rightarrow x = 2$$

$$\text{and } y = 3-2$$

$$y = 1$$

$$AB^2 = (2-1)^2 + (1-0)^2 = 1 + 1 = 2$$

$$\Rightarrow AB = \sqrt{2}$$

$$\text{and } BC^2 = (0-2)^2 + (3-1)^2 = 4 + 4 = 8$$

$$BC = 2\sqrt{2}$$

Area of rectangle ABCD = $AB \times BC$

$$= \sqrt{2} \times 2\sqrt{2}$$

$$= 4 \text{ sq unit}$$

$$42. \text{Given } f'(x) = f(x) \text{ and } f(0) = 1$$

Then let $f(x) = e^x$

Also $f(x) + g(x) = x^2$

$$g(x) = x^2 - e^x$$

Again

$$\int_0^1 f(x)g(x) dx = \int_0^1 e^x(x^2 - e^x) dx$$

$$= \int_0^1 (x^2 e^x - e^{2x}) dx$$

$$= \int_0^1 x^2 e^x dx - \int_0^1 e^{2x} dx$$

$$= [x^2 e^x - \int 2x e^x dx]_0^1 - \frac{1}{2} [e^{2x}]_0^1$$

$$= [x^2 e^x - 2(xe^x - e^x)]_0^1 - \frac{1}{2}(e^2 - e^0)$$

$$= [x^2 e^x - 2x e^x + 2e^x]_0^1 - \frac{1}{2}(e^2 - 1)$$

$$= [(x^2 - 2x + 2)e^x]_0^1 - \frac{1}{2}e^2 + \frac{1}{2}$$

$$\begin{aligned}
&= [(1-2+2)e^1 - (0-0+2)e^0] - \frac{1}{2}e^2 + \frac{1}{2} \\
&= [e-2] - \frac{1}{2}e^2 + \frac{1}{2} \\
&= e - \frac{1}{2}e^2 - \frac{3}{2}
\end{aligned}$$

43. General equation of parabola whose axis is x-axis, is

$$y^2 = 4a(x+h)$$

On differentiating with respect to x

$$2y \frac{dy}{dx} = 4a \Rightarrow y \frac{dy}{dx} = 2a$$

Again differentiating, we get

$$y \left(\frac{dy}{dx} \right)^2 + y \frac{d^2y}{dx^2} = 0$$

This is a differential equation whose degree and order are 1 and 2 respectively.

44. $(1+y^2) + (x - e^{\tan^{-1}y}) \frac{dy}{dx} = 0$

$$\Rightarrow (1+y^2) \frac{dx}{dy} + x = e^{\tan^{-1}y}$$

$$\Rightarrow \frac{dx}{dy} + \frac{1}{1+y^2} x = \frac{e^{\tan^{-1}y}}{1+y^2}$$

$$\text{IF} = e^{\int P dy} = e^{\int \frac{1}{1+y^2} dy} = e^{\tan^{-1}y}$$

Therefore required solution is

$$x \cdot e^{\tan^{-1}y} = \int e^{\tan^{-1}y} \cdot \frac{e^{\tan^{-1}y}}{1+y^2} dy + k_1$$

$$xe^{\tan^{-1}y} = \int \frac{e^{2\tan^{-1}y}}{1+y^2} dy + k_1$$

$$xe^{\tan^{-1}y} = \frac{1}{2} e^{2\tan^{-1}y} + k_1$$

$$2x e^{\tan^{-1}y} = e^{2\tan^{-1}y} + k$$

45. Let $P(\alpha, \beta)$ be the point which is equidistant to $A(a_1, b_1)$ and $B(a_2, b_2)$.

$$\begin{aligned}
&\therefore PA = PB \\
&\Rightarrow (\alpha - a_1)^2 + (\beta - b_1)^2 = (\alpha - a_2)^2 + (\beta - b_2)^2 \\
&\Rightarrow \alpha^2 + a_1^2 + 2a_1\alpha + \beta^2 + b_1^2 - 2\beta b_1 \\
&\quad = \alpha^2 + a_2^2 - 2a_2\alpha + \beta^2 + b_2^2 - 2\beta b_2 \\
&\Rightarrow 2(a_2 - a_1)\alpha + 2(b_2 - b_1)\beta \\
&\quad + (a_1^2 + b_1^2 - a_2^2 - b_2^2) = 0 \\
&\Rightarrow (a_2 - a_1)\alpha + (b_2 - b_1)\beta \\
&\quad + \frac{1}{2}(a_1^2 + b_1^2 - a_2^2 - b_2^2) = 0
\end{aligned}$$

Thus the equation of locus is

$$\begin{aligned}
&(a_2 - a_1)x + (b_2 - b_1)y \\
&\quad + \frac{1}{2}(a_1^2 + b_1^2 - a_2^2 - b_2^2) = 0
\end{aligned}$$

But the given equation is

$$(a_2 - a_1)x + (b_2 - b_1)y + c = 0$$

$$\therefore c = -\frac{1}{2}(a_1^2 + b_1^2 - a_2^2 - b_2^2)$$

$$= \frac{1}{2}(a_2^2 + b_2^2 - a_1^2 - b_1^2)$$

Alternate Solution

(a_1, b_1) and (a_2, b_2) satisfy the equation. So that

$$a_1(a_1 - a_2) + b_1(b_1 - b_2) + c = 0 \quad \dots(i)$$

$$\text{and } a_2(a_1 - a_2) + b_2(b_1 - b_2) + c = 0 \quad \dots(ii)$$

On adding Eqs. (i) and (ii), we get

$$(a_1 + a_2)(a_1 - a_2) + (b_1 + b_2)(b_1 - b_2) + 2c = 0$$

$$\Rightarrow 2c = -(a_1^2 - a_2^2 + b_1^2 - b_2^2)$$

$$\Rightarrow c = \frac{1}{2}(a_2^2 + b_2^2 - a_1^2 - b_1^2)$$

46. Co-ordinates of the vertices of a triangle are $(a \cos t, a \sin t)$, $(b \sin t, -b \cos t)$ and $(1, 0)$. centroid is

$$x = \frac{a \cos t + b \sin t + 1}{3}$$

$$\Rightarrow 3x - 1 = a \cos t + b \sin t \quad \dots(i)$$

$$\text{and } y = \frac{a \sin t - b \cos t + 0}{3}$$

$$\Rightarrow 3y = a \sin t - b \cos t \quad \dots(ii)$$

Squaring and adding Eqs. (i) and (ii), we get

$$\begin{aligned}
&(3x - 1)^2 + (3y)^2 \\
&= (a \cos t + b \sin t)^2 + (a \sin t - b \cos t)^2 \\
&(3x - 1)^2 + (3y)^2 = a^2 + b^2
\end{aligned}$$

47. The given equation is $x^2 - 2pxy - y^2 = 0$.

On comparing with

$$ax^2 + 2hxy + by^2 = 0, \text{ we get}$$

$$a = 1, b = -1, 2h = -2p \Rightarrow h = -p$$

Equation of the bisector of angles

$$\frac{x^2 - y^2}{a - b} = \frac{xy}{h}$$

$$\Rightarrow \frac{x^2 - y^2}{1 - 1} = \frac{xy}{-p}$$

$$\Rightarrow \frac{x^2 - y^2}{0} = -\frac{2xy}{p}$$

$$\Rightarrow x^2 + \frac{2xy}{p} - y^2 = 0 \quad \dots(i)$$

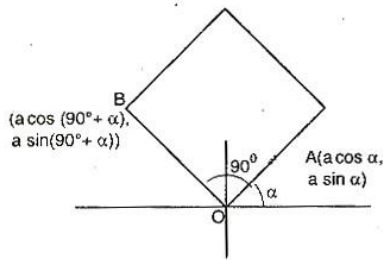
But given equation of the bisector of angles is

$$x^2 - 2qxy - y^2 = 0 \quad \dots(ii)$$

On comparing (i) and (ii), we get

$$\frac{2}{p} = -2q \Rightarrow pq = -1$$

48. Line OA makes an angle α with x-axis and $OA = a$, then co-ordinates of A are $(a \cos \alpha, a \sin \alpha)$.



Also $OB \perp OA$, then OB makes an angle $(90^\circ + \alpha)$ with x -axis, then co-ordinates of B are $(a \cos(90^\circ + \alpha), a \sin(90^\circ + \alpha))$

$$= (-a \sin \alpha, a \cos \alpha)$$

Equation of the diagonal not passing through the origin is

$$(y - a \sin \alpha) = \frac{a \cos \alpha - a \sin \alpha}{-a \sin \alpha - a \cos \alpha} (x - a \cos \alpha)$$

$$\Rightarrow (y - a \sin \alpha) = \frac{\sin \alpha - \cos \alpha}{\sin \alpha + \cos \alpha} (x - a \cos \alpha)$$

$$\Rightarrow (\sin \alpha + \cos \alpha)(y - a \sin \alpha) = (\sin \alpha - \cos \alpha)(x - a \cos \alpha)$$

$$\Rightarrow (\sin \alpha + \cos \alpha)y - a \sin \alpha (\sin \alpha + \cos \alpha) = (\sin \alpha - \cos \alpha)x - a \cos \alpha (\sin \alpha - \cos \alpha)$$

$$\Rightarrow y(\sin \alpha + \cos \alpha) + x(\cos \alpha - \sin \alpha)$$

$$= a \sin \alpha (\sin \alpha + \cos \alpha)$$

$$- a \cos \alpha (\sin \alpha - \cos \alpha)$$

$$= a[\sin^2 \alpha + \sin \alpha \cos \alpha$$

$$- \cos \alpha \sin \alpha + \cos^2 \alpha]$$

$$\therefore y(\sin \alpha + \cos \alpha) + x(\cos \alpha - \sin \alpha) = a$$

49. Key Idea : Two circles of radii r_1 and r_2 respectively intersect in two distinct points, if $r_1 - r_2 < C_1C_2 < r_1 + r_2$.

The equation of first circle is

$$(x - 1)^2 + (y - 3)^2 = r^2$$

Centre $C_1(1, 3)$ and radius $r_1 = r$

and equation of second circle is

$$x^2 + y^2 - 8x + 2y + 8 = 0$$

Centre $C_2(4, -1)$ and radius $r_2 = \sqrt{4^2 + 1^2 - 8}$

$$= \sqrt{17 - 8} = 3$$

Two circles intersect in two distinct points, then

$$r_1 - r_2 < C_1C_2 < r_1 + r_2$$

$$\Rightarrow r - 3 < \sqrt{(4-1)^2 + (-1-3)^2} < r + 3$$

$$\Rightarrow r - 3 < \sqrt{9 + 16} < r + 3$$

$$\Rightarrow r - 3 < 5 < r + 3$$

$$\Rightarrow r - 3 < 5 \text{ and } 5 < r + 3$$

$$\Rightarrow r < 8 \text{ and } 2 < r$$

$$\Rightarrow 2 < r < 8$$

50. The equations of diameters of a circle are

$$2x - 3y = 5 \quad \dots(i)$$

$$\text{and } 3x - 4y = 7 \quad \dots(ii)$$

On solving Eqs. (i) and (ii), we get

$$x = 1, y = -1.$$

\therefore Co-ordinates of centre are $(1, -1)$

and area of the circle $= \pi r^2$

$$\Rightarrow 154 = \frac{22}{7} r^2$$

$$\Rightarrow r = 7$$

Equation of the circle is

$$(x - 1)^2 + (y + 1)^2 = 7^2$$

$$\Rightarrow x^2 - 2x + 1 + y^2 + 2y + 1 = 49$$

$$\Rightarrow x^2 + y^2 - 2x + 2y = 47$$

51. Key Idea : Equation of normal at a point $(at^2, 2at)$ on a parabola $y^2 = 4ax$ is $y = -tx + 2at + bt^3$.

Equation of the normal at point $(bt_1^2, 2bt_1)$ on parabola is

$$y = -t_1 x + 2bt_1 + bt_1^3$$

It also passes through $(bt_2^2, 2bt_2)$, then

$$2bt_2 = -t_1 \cdot bt_2^2 + 2bt_1 + bt_1^3$$

$$2t_2 - 2t_1 = -t_1(t_2^2 - t_1^2)$$

$$= -t_1(t_2 + t_1)(t_2 - t_1)$$

$$\Rightarrow 2 = -t_1(t_2 + t_1)$$

$$\Rightarrow t_2 + t_1 = -\frac{2}{t_1}$$

$$\Rightarrow t_2 = -t_1 - \frac{2}{t_1}$$

Note :

1. If a normal drawn at a point t_1 on the parabola meets the parabola again at a point t_2 , then

$$t_2 = -t_1 - \frac{2}{t_1}$$

2. Three normals can be drawn at a point on a parabola.

3. Foot of the normals drawn from a point are called conormal points.

52. Key Idea : The foci of an ellipse $\frac{x^2}{a^2} + \frac{y^2}{b^2} = 1$ are

$(\pm ae, 0)$ and foci of a hyperbola $\frac{x^2}{a'^2} - \frac{y^2}{b'^2} = 1$ are

$(\pm a' e', 0)$.

Equation of the hyperbola

$$\frac{x^2}{\left(\frac{12}{5}\right)^2} - \frac{y^2}{\left(\frac{9}{5}\right)^2} = 1$$

Eccentricity is given by

$$b'^2 = a'^2 (e'^2 - 1)$$

$$\Rightarrow \frac{81}{25} = \frac{144}{25} (e'^2 - 1)$$

$$\Rightarrow e'^2 = 1 + \frac{9}{16} = \frac{25}{16}$$

$$\Rightarrow e' = \frac{5}{4}$$

Then, foci of a hyperbola are

$$(\pm a' e', 0) = \left(\pm \frac{12}{5} \times \frac{5}{4}, 0 \right)$$

$$= (\pm 3, 0)$$

Equation of the ellipse is

$$\frac{x^2}{16} + \frac{y^2}{b^2} = 1$$

Foci of an ellipse are $(\pm ae, 0) = (\pm 4e, 0)$.

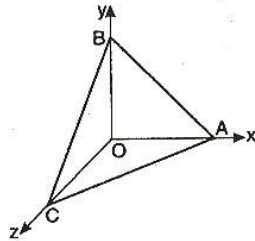
But given focus of ellipse and hyperbola coincide, then

$$4e = 3 \Rightarrow e = \frac{3}{4}$$

Also $b^2 = a^2 (1 - e^2)$

$$= 16 \left(1 - \frac{9}{16} \right) = 16 - 9 = 7$$

53. Vector perpendicular to face $OAB = \vec{n}_1$



$$= \vec{OA} \times \vec{OB} = (\hat{i} + 2\hat{j} + \hat{k}) \times (2\hat{i} + \hat{j} + 3\hat{k})$$

$$= (5\hat{i} - \hat{j} - 3\hat{k})$$

Vector perpendicular to face $ABC = \vec{n}_2$

$$= \vec{AB} \times \vec{AC} = (\hat{i} - \hat{j} + 2\hat{k}) \times (-2\hat{i} - \hat{j} + \hat{k})$$

$$= (\hat{i} - 5\hat{j} - 3\hat{k})$$

Since angle between faces equals angle between their normals. Therefore

$$\cos \theta = \frac{\vec{n}_1 \cdot \vec{n}_2}{|\vec{n}_1| |\vec{n}_2|}$$

$$= \frac{5 \times 1 + (-1) \times (-5) + (-3) \times (-3)}{\sqrt{5^2 + (-1)^2 + (-3)^2} \sqrt{1^2 + (-5)^2 + (-3)^2}}$$

$$= \frac{5 + 5 + 9}{\sqrt{35} \sqrt{35}} = \frac{19}{35}$$

$$\theta = \cos^{-1} \left(\frac{19}{35} \right)$$

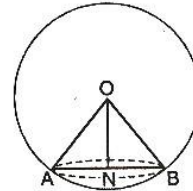
54. Equation of sphere is

$$x^2 + y^2 + z^2 + 2x - 2y - 4z - 19 = 0$$

Centre of the sphere is $(-1, 1, 2)$

$$\text{and radius} = \sqrt{(-1)^2 + (1)^2 + (2)^2 + 19}$$

$$= \sqrt{25} = 5$$



Equation of plane is

$$x + 2y + 2z + 7 = 0$$

Length of the perpendicular from centre O on the plane is

$$ON = \frac{-1 \times 1 + 1 \times 2 + 2 \times 2 + 7}{\sqrt{1^2 + 2^2 + 2^2}}$$

$$= \frac{12}{3} = 4$$

In $\triangle OBN$, $OB^2 = ON^2 + NB^2$

$$\Rightarrow 5^2 = 4^2 + NB^2$$

$$\Rightarrow NB^2 = 25 - 16$$

$$\Rightarrow NB^2 = 9$$

$$\Rightarrow NB = 3$$

55. The lines

$$\frac{x-2}{1} = \frac{y-3}{1} = \frac{z-4}{-k} \quad \dots(i)$$

$$\text{and} \quad \frac{x-1}{k} = \frac{y-4}{2} = \frac{z-5}{1} \quad \dots(ii)$$

are coplanar, if

$$\begin{vmatrix} x_2 - x_1 & y_2 - y_1 & z_2 - z_1 \\ l_1 & m_1 & n_1 \\ l_2 & m_2 & n_2 \end{vmatrix} = 0$$

$$\Rightarrow \begin{vmatrix} -1 & 1 & 1 \\ 1 & 1 & -k \\ k & 2 & 1 \end{vmatrix} = 0$$

$$\Rightarrow -1(1 + 2k) - 1(1 + k^2) + 1(2 - k) = 0$$

$$\Rightarrow -2k - 1 - 1 - k^2 + 2 - k = 0$$

$$\Rightarrow -k^2 - 3k = 0$$

$$\Rightarrow k = 0 \text{ or } -3$$

56. Equations of the lines are

$$\begin{aligned} x &= ay + b, \quad z = cy + d \\ \Rightarrow \frac{x-b}{a} &= y, \quad \frac{z-d}{c} = y \\ \Rightarrow \frac{x-b}{a} &= \frac{y-0}{1} = \frac{z-d}{c} \quad \dots(i) \end{aligned}$$

$$\begin{aligned} \text{and } x &= a'y + b', \quad z = c'y + d' \\ \frac{x-b'}{a'} &= y, \quad \frac{z-d'}{c'} = y \\ \Rightarrow \frac{x-b'}{a'} &= \frac{y-0}{1} = \frac{z-d'}{c'} \quad \dots(ii) \end{aligned}$$

Eqs. (i) and (ii) will be perpendicular to each other, if

$$\begin{aligned} l_1 l_2 + m_1 m_2 + n_1 n_2 &= 0 \\ \Rightarrow aa' + 1 \times 1 + c \times c' &= 0 \\ \Rightarrow aa' + cc' + 1 &= 0 \end{aligned}$$

57. Equations of sphere and plane are

$$x^2 + y^2 + z^2 + 4x - 2y - 6z - 155 = 0$$

$$\text{and } 12x + 4y + 3z - 327 = 0$$

Centre of the sphere is $(-2, 1, 3)$

and radius of sphere

$$= \sqrt{4 + 1 + 9 + 155} = \sqrt{169} = 13$$

Length of the perpendicular from centre on the plane

$$\begin{aligned} &= \frac{|-2 \times 12 + 1 \times 4 + 3 \times 3 - 327|}{\sqrt{144 + 16 + 9}} \\ &= \frac{|-11 - 327|}{13} \\ &= \frac{338}{13} = 26 \end{aligned}$$

Shortest distance between the plane and sphere

$$= 26 - \text{radius of sphere}$$

$$= 26 - 13 = 13$$

58. Consider Ox, Oy, Oz and Ox', Oy', Oz' are two system of rectangular axes.

Equation of the plane corresponding to Ox', Oy', Oz' as axes is

$$\frac{X}{a} + \frac{Y}{b} + \frac{Z}{c} = 1 \quad \dots(i)$$

Similarly, equation of the plane corresponding to Ox, Oy, Oz as axes is

$$\frac{x}{a'} + \frac{y}{b'} + \frac{z}{c'} = 1 \quad \dots(ii)$$

Length of perpendicular from origin to (i) and (ii) must be same.

$$\text{i. e., } \frac{1}{\sqrt{\frac{1}{a^2} + \frac{1}{b^2} + \frac{1}{c^2}}} = \frac{1}{\sqrt{\frac{1}{a'^2} + \frac{1}{b'^2} + \frac{1}{c'^2}}}$$

$$\begin{aligned} \Rightarrow \frac{1}{a^2} + \frac{1}{b^2} + \frac{1}{c^2} &= \frac{1}{a'^2} + \frac{1}{b'^2} + \frac{1}{c'^2} \\ \Rightarrow \frac{1}{a^2} + \frac{1}{b^2} + \frac{1}{c^2} - \frac{1}{a'^2} - \frac{1}{b'^2} - \frac{1}{c'^2} &= 0 \end{aligned}$$

$$59. (\vec{a} + \vec{b} + \vec{c})^2 = (\vec{a} + \vec{b} + \vec{c}) \cdot (\vec{a} + \vec{b} + \vec{c})$$

$$\begin{aligned} \Rightarrow (\vec{a} + \vec{b} + \vec{c})^2 &= |\vec{a}|^2 + |\vec{b}|^2 + |\vec{c}|^2 \\ &\quad + 2(\vec{a} \cdot \vec{b} + \vec{b} \cdot \vec{c} + \vec{c} \cdot \vec{a}) \end{aligned}$$

$$\Rightarrow 0 = 1^2 + 2^2 + 3^2 + 2(\vec{a} \cdot \vec{b} + \vec{b} \cdot \vec{c} + \vec{c} \cdot \vec{a})$$

$$\Rightarrow 2(\vec{a} \cdot \vec{b} + \vec{b} \cdot \vec{c} + \vec{c} \cdot \vec{a}) = -14$$

$$\Rightarrow \vec{a} \cdot \vec{b} + \vec{b} \cdot \vec{c} + \vec{c} \cdot \vec{a} = -7$$

$$60. (\vec{u} + \vec{v} - \vec{w}) \cdot [(\vec{u} - \vec{v}) \times (\vec{v} - \vec{w})]$$

$$\begin{aligned} &= (\vec{u} + \vec{v} - \vec{w}) \cdot [\vec{u} \times \vec{v} - \vec{u} \times \vec{w} \\ &\quad - \vec{v} \times \vec{v} + \vec{v} \times \vec{w}] \end{aligned}$$

$$= \vec{u} \cdot \vec{u} \times \vec{v} - \vec{u} \cdot \vec{u} \times \vec{w} + \vec{u} \cdot \vec{v} \times \vec{w}$$

$$+ \vec{v} \cdot \vec{u} \times \vec{v} - \vec{v} \cdot \vec{u} \times \vec{w} + \vec{v} \cdot \vec{v} \times \vec{w}$$

$$- \vec{w} \cdot \vec{u} \times \vec{v} + \vec{w} \cdot \vec{u} \times \vec{w} - \vec{w} \cdot \vec{v} \times \vec{w}$$

$$= \vec{u} \cdot \vec{v} \times \vec{w} - \vec{v} \cdot \vec{u} \times \vec{w} - \vec{w} \cdot \vec{u} \times \vec{v}$$

$$= \vec{u} \cdot \vec{v} \times \vec{w} + \vec{w} \cdot \vec{u} \times \vec{v} - \vec{w} \cdot \vec{u} \times \vec{v}$$

$$= \vec{u} \cdot \vec{v} \times \vec{w}$$

$$\text{Since } [\vec{u} \ \vec{u} \ \vec{v}] = [\vec{u} \ \vec{u} \ \vec{w}]$$

$$= [\vec{v} \ \vec{u} \ \vec{v}] = [\vec{v} \ \vec{v} \ \vec{w}]$$

$$= [\vec{w} \ \vec{u} \ \vec{w}] = [\vec{w} \ \vec{v} \ \vec{w}] = 0$$

Note :

If $\vec{u}, \vec{v}, \vec{w}$ are coplanar vectors, then

$$[\vec{u} \ \vec{v} \ \vec{w}] = 0$$

61. Given

$$\vec{OA} = 7\hat{i} - 4\hat{j} + 7\hat{k}, \quad \vec{OB} = \hat{i} - 6\hat{j} + 10\hat{k},$$

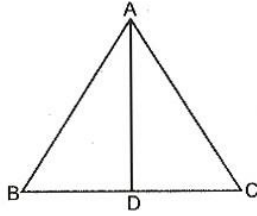
$$\vec{OC} = -\hat{i} - 3\hat{j} + 4\hat{k} \text{ and } \vec{OD} = 5\hat{i} - \hat{j} + 5\hat{k}$$

$$AB = \sqrt{(7-1)^2 + (-4+6)^2 + (7-10)^2}$$

$$\begin{aligned}
 &= \sqrt{36 + 4 + 9} = \sqrt{49} = 7 \\
 BC &= \sqrt{(1+1)^2 + (-6+3)^2 + (10-4)^2} \\
 &= \sqrt{4 + 9 + 36} = \sqrt{49} = 7 \\
 CD &= \sqrt{(-1-5)^2 + (-3+1)^2 + (4-5)^2} \\
 &= \sqrt{36 + 4 + 1} = \sqrt{41} \\
 DA &= \sqrt{(5-7)^2 + (-1+4)^2 + (5-7)^2} \\
 &= \sqrt{4 + 9 + 4} = \sqrt{17}
 \end{aligned}$$

Thus no option is correct.

62. Let D is mid point of BC .



$$\begin{aligned}
 \therefore \vec{AD} &= \frac{\vec{AB} + \vec{AC}}{2} \\
 &= \frac{(3\hat{i} + 4\hat{k}) + (5\hat{i} - 2\hat{j} + 4\hat{k})}{2} \\
 &= \frac{8\hat{i} - 2\hat{j} + 8\hat{k}}{2} = 4\hat{i} - \hat{j} + 4\hat{k} \\
 \therefore \text{Length of } \vec{AD} &= |\vec{AD}| = \sqrt{4^2 + (-1)^2 + 4^2} \\
 &= \sqrt{16 + 1 + 16} = \sqrt{33}
 \end{aligned}$$

63. Total force

$$\begin{aligned}
 \vec{F} &= (4\hat{i} + \hat{j} - 3\hat{k}) + (3\hat{i} + \hat{j} - \hat{k}) \\
 &= 7\hat{i} + 2\hat{j} - 4\hat{k}
 \end{aligned}$$

Displacement

$$\begin{aligned}
 \vec{d} &= (5\hat{i} + 4\hat{j} + \hat{k}) - (\hat{i} + 2\hat{j} + 3\hat{k}) \\
 &= (4\hat{i} + 2\hat{j} - 2\hat{k})
 \end{aligned}$$

Total work done = $\vec{F} \cdot \vec{d}$

$$\begin{aligned}
 &= (7\hat{i} + 2\hat{j} - 4\hat{k}) \cdot (4\hat{i} + 2\hat{j} - 2\hat{k}) \\
 &= 28 + 4 + 8 \\
 &= 40 \text{ unit}
 \end{aligned}$$

64. $\vec{u} = \hat{i} + \hat{j}$, $\vec{v} = \hat{i} - \hat{j}$ and $\vec{w} = \hat{i} + 2\hat{j} + 3\hat{k}$,

\hat{n} is a unit vector such that

$$\vec{u} \cdot \hat{n} = 0$$

and $\vec{v} \cdot \hat{n} = 0$

Therefore, \hat{n} is perpendicular to both \vec{u} and \vec{v}

But \vec{u}, \vec{v} lie in the xy plane.

$\Rightarrow \hat{n}$ is a unit vector along z -axis

Hence, $|\vec{w} \cdot \hat{n}| = 3$

65. Median of new set remains the same as that of the original set.

66. Given $N = 15$

$$\Sigma x^2 = 2830, \quad \Sigma x = 170$$

One observation 20 was replaced by 30, then

$$\Sigma x^2 = 2830 - 400 + 900 = 3330$$

$$\Sigma x = 170 - 20 + 30 = 180$$

$$\begin{aligned}
 \text{Variance, } \sigma^2 &= \frac{\Sigma x^2}{N} - \left(\frac{\Sigma x}{N}\right)^2 \\
 &= \frac{3330}{15} - \left(\frac{180}{15}\right)^2 \\
 &= \frac{3330 - 15 \times 144}{15} \\
 &= \frac{3330 - 2160}{15} = \frac{1170}{15} = 78.0
 \end{aligned}$$

67. The probability that Mr. A selected the loosing

$$\text{horse} = \frac{4}{5} \times \frac{3}{4} = \frac{3}{5}$$

The probability that Mr. A selected the winning

$$\text{horse} = 1 - \frac{3}{5} = \frac{2}{5}$$

68. $0 \leq P(A) \leq 1, 0 \leq P(B) \leq 1, 0 \leq P(C) \leq 1$

$$\text{and } 0 \leq P(A) + P(B) + P(C) \leq 1$$

$$\therefore 0 \leq \frac{3x+1}{3} \leq 1$$

$$\Rightarrow -\frac{1}{3} \leq x \leq \frac{2}{3}$$

$$0 \leq \frac{1-x}{4} \leq 1$$

$$\Rightarrow -3 \leq x \leq 1$$

$$\text{and } 0 \leq \frac{1-2x}{2} \leq 1$$

$$\Rightarrow -\frac{1}{2} \leq x \leq \frac{1}{2}$$

$$\text{and } 0 \leq \frac{3x+1}{3} + \frac{1-x}{4} + \frac{1-2x}{2} \leq 1$$

$$0 \leq 13 - 3x \leq 12$$

$$\Rightarrow \frac{1}{3} \leq x \leq \frac{13}{3}$$

From all these conditions

$$\frac{1}{3} \leq x \leq \frac{1}{2}$$

69. **Key Idea :** The mean and variance of a random variable in binomial distribution are np and npq

and

$$P(X = r) = {}^n C_r \cdot q^{n-r} p^r.$$

Since, $np = 4$ and $npq = 2$
 $q = \frac{1}{2}$, but $p + q = 1 \Rightarrow p = \frac{1}{2}$

$$n \times \frac{1}{2} = 4 \Rightarrow n = 8$$

We have, $P(X=r) = {}^nC_r p^r q^{n-r}$

$$\begin{aligned} \therefore P(X=1) &= {}^8C_1 \left(\frac{1}{2}\right)^1 \left(\frac{1}{2}\right)^7 \\ &= 8 \times \frac{1}{2^8} = \frac{1}{2^5} = \frac{1}{32} \end{aligned}$$

70. Key Idea : Resultant force of two forces P and Q acting at an angle α , is given by

$$R = \sqrt{P^2 + Q^2 + 2PQ \cos \alpha}$$

If α is the angle between \vec{P} and \vec{Q} , then
 $R^2 = P^2 + Q^2 + 2PQ \cos \alpha$... (i)

If \vec{Q} is doubled, then \vec{R} is doubled
 $\Rightarrow 4R^2 = P^2 + 4Q^2 + 4PQ \cos \alpha$... (ii)

Again if the direction of \vec{Q} is reversed, then \vec{R} is again doubled

$$\begin{aligned} \Rightarrow 4R^2 &= P^2 + (-Q)^2 + 2P(-Q) \cos \alpha \\ 4R^2 &= P^2 + Q^2 - 2PQ \cos \alpha \end{aligned} \quad \dots \text{(iii)}$$

Adding (i) and (iii)
 $5R^2 = 2P^2 + 2Q^2$... (iv)

Multiplying by 2 in (iii) and adding (ii)
 $12R^2 = 3P^2 + 6Q^2$
 $\Rightarrow 4R^2 = P^2 + 2Q^2$... (v)

Subtracting (v) from (iv), we get
 $R^2 = P^2$

Putting in (v)
 $4R^2 = R^2 + 2Q^2$
 $\Rightarrow 3R^2 = 2Q^2$
 $\therefore \frac{P^2}{2} = \frac{Q^2}{3} = \frac{R^2}{2}$
 $\Rightarrow P^2 : Q^2 : R^2 = 2 : 3 : 2$

71. Since R_1 and R_2 respectively be the maximum ranges up and down an inclined plane, then

$$R_1 = \frac{u^2}{g(1 + \sin \beta)},$$

$$R_2 = \frac{u^2}{g(1 - \sin \beta)},$$

$$R = \frac{u^2}{g}$$

$$\begin{aligned} \text{Now, } \frac{1}{R_1} + \frac{1}{R_2} &= \frac{g(1 + \sin \beta)}{u^2} + \frac{g(1 - \sin \beta)}{u^2} \\ &= \frac{g[1 + \sin \beta + 1 - \sin \beta]}{u^2} \end{aligned}$$

$$= \frac{2g}{u^2} = \frac{2}{R}$$

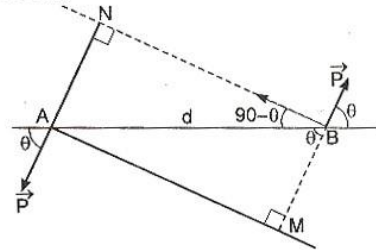
$$\Rightarrow \frac{1}{R_1} + \frac{1}{R_2} = \frac{2}{R}$$

$$\Rightarrow \frac{1}{R_1}, \frac{1}{R}, \frac{1}{R_2} \text{ are in AP}$$

$$\Rightarrow R_1, R, R_2 \text{ are in HP.}$$

72. Let $AB = d$.

AM is the perpendicular distance from A to B .
 In $\triangle ABM$,



$$\begin{aligned} \sin \theta &= \frac{AM}{AB} \\ AM &= d \sin \theta \end{aligned}$$

Moment of couple,

$$\vec{G} = \vec{P} \cdot AM = \vec{P} \cdot d \sin \theta \quad \dots \text{(i)}$$

Where \vec{P} is turned a right angle, then
 Moment of couple,

$$\vec{H} = \vec{P} \cdot d \sin (90^\circ + \theta) = \vec{P} \cdot d \cos \theta \quad \dots \text{(ii)}$$

When \vec{P} is turned through an angle α , then
 Moment of couple

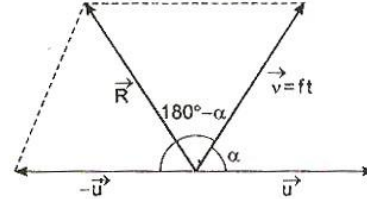
$$\begin{aligned} &= \vec{P} \cdot d \sin (\alpha + \theta) \\ &= \vec{P} \cdot d [\sin \alpha \cos \theta + \cos \alpha \sin \theta] \\ &= (\vec{P} \cdot d \cos \theta) \sin \alpha + (\vec{P} \cdot d \sin \theta) \cos \alpha \\ &= \vec{G} \cos \alpha + \vec{H} \sin \alpha \quad [\text{Using (i) and (ii)}] \end{aligned}$$

73. We have

$$R^2 = u^2 + f^2 t^2 + 2uft \cos (180^\circ - \alpha)$$

$$R^2 = u^2 + f^2 t^2 - 2uft \cos \alpha$$

Let $V = u^2 + f^2 t^2 - 2uft \cos \alpha$



$$\frac{dV}{dt} = 0 + 2f^2 t - 2uf \cos \alpha$$

$$\frac{d^2V}{dt^2} = 2f^2 = +ve$$

i. e., velocity will be least after a time.

$$\frac{dV}{dt} = 0 = 2f^2 t - 2uf \cos \alpha$$

$$\Rightarrow 2f^2 t = 2uf \cos \alpha$$

$$\Rightarrow t = \frac{2uf \cos \alpha}{2f^2}$$

$$\Rightarrow t = \frac{u \cos \alpha}{f}$$

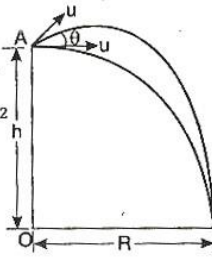
74. When stone is projected horizontally, then

$$R = u \cos 0 \times t$$

and $h = u \sin 0 \times t + \frac{1}{2} g t^2$

$$\Rightarrow R = ut \text{ and } h = \frac{1}{2} g t^2$$

$$\Rightarrow R = ut \text{ and } t = \sqrt{\frac{2h}{g}}$$

$$\Rightarrow R = u \sqrt{\frac{2h}{g}} \quad \dots(i)$$


When stone is projected at an angle of θ to the horizontal, then

$$R = u \cos \theta \times t \quad \dots(ii)$$

$$\text{and } h = -u \sin \theta \times t + \frac{1}{2} g t^2 \quad \dots(iii)$$

Using Eq. (i) in Eq. (ii), we get

$$u \sqrt{\frac{2h}{g}} = u \cos \theta \times t$$

$$\Rightarrow t = \frac{1}{\cos \theta} \sqrt{\frac{2h}{g}} \quad \dots(iv)$$

Using Eq. (iv) in Eq. (iii), we get

$$h = \frac{-u \sin \theta}{\cos \theta} \sqrt{\frac{2h}{g}} + \frac{1}{2} g \frac{1}{\cos^2 \theta} \left(\frac{2h}{g} \right)$$

$$\Rightarrow h = -u \tan \theta \sqrt{\frac{2h}{g}} + \frac{h}{\cos^2 \theta}$$

$$\Rightarrow h \left[1 - \frac{1}{\cos^2 \theta} \right] = -u \tan \theta \sqrt{\frac{2h}{g}}$$

$$\Rightarrow h (-\tan^2 \theta) = -u \tan \theta \sqrt{\frac{2h}{g}}$$

$$\Rightarrow \tan \theta = u \sqrt{\frac{2}{gh}}$$

75. Here $x_1 + x_2 = s$



and $t_1 + t_2 = t$

We have from A to C

$$v^2 = u^2 + 2fx_1$$

$$v^2 = 0 + 2fx_1$$

$$\Rightarrow x_1 = \frac{v^2}{2f} \quad \dots(i)$$

and $v = u + ft$

$$\Rightarrow v = 0 + ft_1$$

$$\Rightarrow t_1 = \frac{v}{f} \quad \dots(ii)$$

From C to B, $v^2 = u^2 + 2fx_2$

$$v^2 = v^2 - 2rx_2$$

$$0 = v^2 - 2rx_2$$

$$\Rightarrow x_2 = \frac{v^2}{2r} \quad \dots(iii)$$

and $v' = v - rt_2$

$$\Rightarrow 0 = v - rt_2$$

$$\Rightarrow t_2 = \frac{v}{r} \quad \dots(iv)$$

On adding Eqs. (i) and (iii)

$$x_1 + x_2 = \frac{v^2}{2} \left(\frac{1}{f} + \frac{1}{r} \right)$$

$$2s = v^2 \left(\frac{1}{f} + \frac{1}{r} \right) \quad \dots(v)$$

On adding Eqs. (ii) and (iv)

$$\Rightarrow t_1 + t_2 = v \left(\frac{1}{f} + \frac{1}{r} \right)$$

$$\Rightarrow t = v \left(\frac{1}{f} + \frac{1}{r} \right)$$

$$\Rightarrow t^2 = v^2 \left(\frac{1}{f} + \frac{1}{r} \right)^2 \quad \dots(vi)$$

On dividing Eqs. (vi) by (v)

$$\frac{t^2}{2s} = \frac{v^2 \left(\frac{1}{f} + \frac{1}{r} \right)^2}{v^2 \left(\frac{1}{f} + \frac{1}{r} \right)}$$

$$= \left(\frac{1}{f} + \frac{1}{r} \right)$$

$$\Rightarrow t = \sqrt{2s \left(\frac{1}{f} + \frac{1}{r} \right)}$$